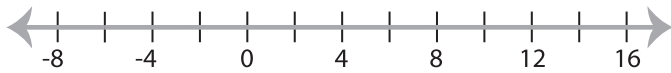


**Solving & Graphing Inequalities**

DS4

Solve each inequality and graph the solution.

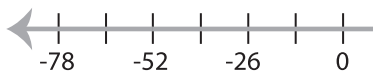
1)  $4x + 5 < -19$



2)  $3 > \frac{x+9}{6}$



3)  $-11 \geq \frac{x}{4} + 2$



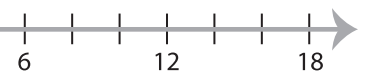
**PREVIEW**

Gain complete access to the largest collection of worksheets in all subjects!

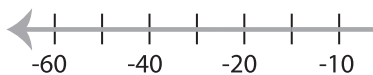
Members, please log in to download this worksheet.

Not a member? Please sign up to gain complete access.

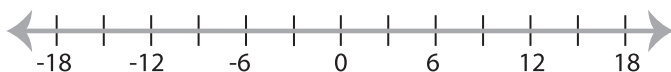
[www.mathworksheets4kids.com](http://www.mathworksheets4kids.com)



5)  $-6x > -8x - 30$



7)  $-12x - 10 \geq 26$



8)  $-7 < -8x + 25$

