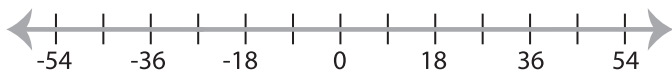


Solving & Graphing Inequalities

DS5

Solve each inequality and graph the solution.

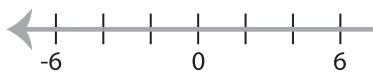
1) $-2 \leq \frac{x-3}{6}$



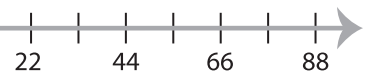
2) $-8x + 10 \geq 26$



3) $5 > -4x - 11$



2



5) $7 \leq \frac{x}{5} - 1$



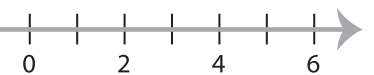
PREVIEW

Gain complete access to the largest
collection of worksheets in all subjects!

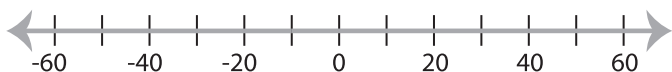
Members, please
log in to
download this
worksheet.

Not a member?
Please sign up to
gain complete
access.

www.mathworksheets4kids.com



7) $-3x - 9 < 21$



8) $-4 \geq \frac{x-5}{3}$

