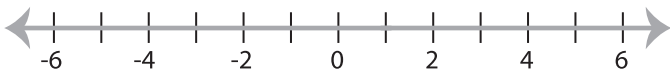


**Solving & Graphing Inequalities**

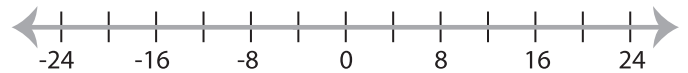
MS1

Solve each inequality and graph the solution.

1)  $5 < 9x - 4$



2)  $3x + 7 \leq -5$



3)  $1 > \frac{x}{7} - 9$



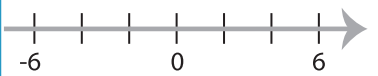
**PREVIEW**

Gain complete access to the largest  
collection of worksheets in all subjects!

Members, please  
log in to  
download this  
worksheet.

Not a member?  
Please sign up to  
gain complete  
access.

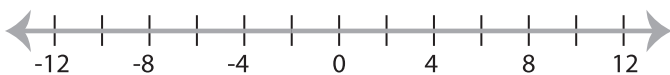
[www.mathworksheets4kids.com](http://www.mathworksheets4kids.com)



5)  $3 < 2x - 11$



7)  $1 \geq 4x + 9$



8)  $5x - 1 < 4$

