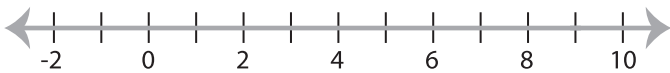


Solving & Graphing Inequalities

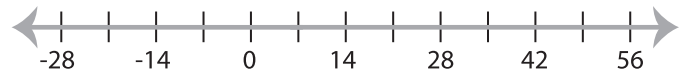
MS2

Solve each inequality and graph the solution.

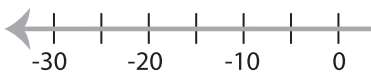
1) $2 > \frac{x}{3} - 1$



2) $2x - 5 \geq 9$



3) $7 \leq 4x + 27$

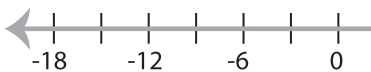


PREVIEW

Gain complete access to the largest collection of worksheets in all subjects!



5) $7x - 18 > 3$



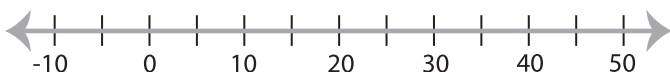
Members, please log in to download this worksheet.

Not a member? Please sign up to gain complete access.

www.mathworksheets4kids.com



7) $\frac{x-7}{2} \geq 9$



8) $20 < 6x - 4$

