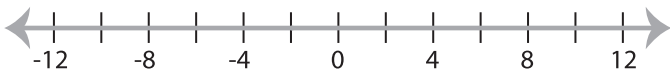


Solving & Graphing Inequalities

MS3

Solve each inequality and graph the solution.

1) $2x + 9 \leq 5$



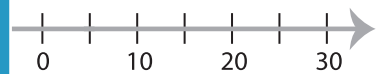
2) $5 < \frac{x}{2} - 7$



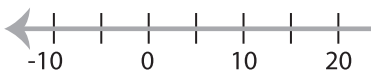
3) $6x - 1 > 17$



x



5) $\frac{x-1}{6} \leq 4$



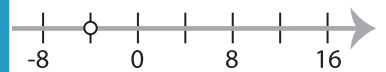
PREVIEW

Gain complete access to the largest
collection of worksheets in all subjects!

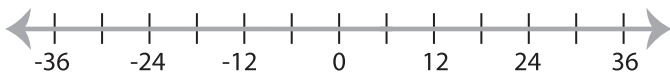
Members, please
log in to
download this
worksheet.

Not a member?
Please sign up to
gain complete
access.

www.mathworksheets4kids.com



7) $9x - 35 > 19$



8) $10 \geq \frac{x-5}{3}$

