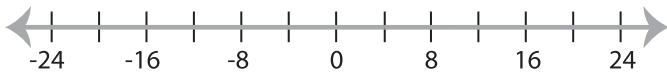


Solving & Graphing Inequalities

MS4

Solve each inequality and graph the solution.

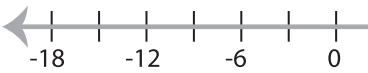
1) $33 \leq 7x + 5$



2) $\frac{x-8}{4} > 6$



3) $13x - 18 < 11x$



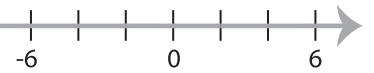
PREVIEW

Gain complete access to the largest
collection of worksheets in all subjects!

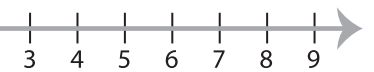
Members, please
log in to
download this
worksheet.

Not a member?
Please sign up to
gain complete
access.

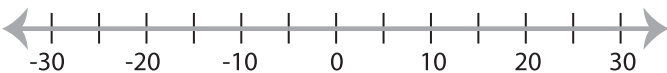
www.mathworksheets4kids.com



5) $\frac{x-3}{6} \leq 7$



7) $3x + 21 > 6$



8) $2 \geq \frac{x}{4} - 1$

