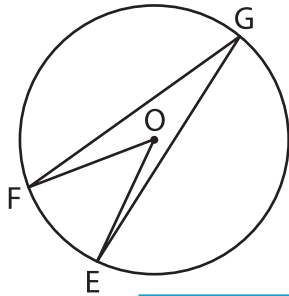


Central and Inscribed Angles

Identify and name the central and inscribed angles in each circle.

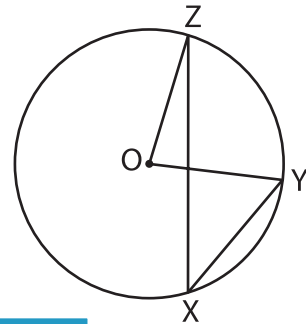
1)



Central angle: _____

Inscribed angle: _____

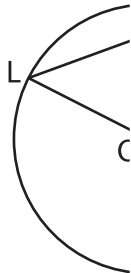
2)



: _____

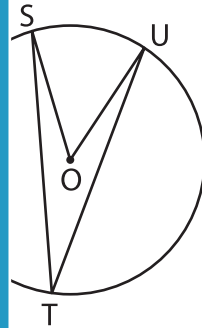
: _____

3)



Central angle: _____

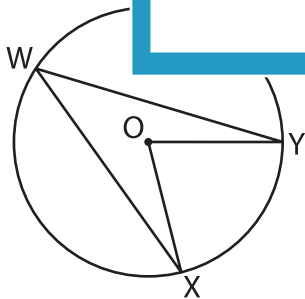
Inscribed angle: _____



: _____

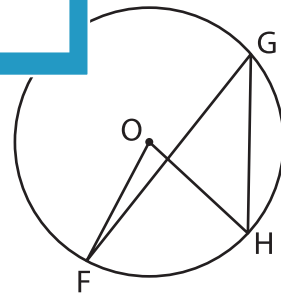
: _____

5)



Central angle: _____

Inscribed angle: _____



Central angle: _____

Inscribed angle: _____

PREVIEW

Gain complete access to the largest collection of worksheets in all subjects!

Members, please log in to download this worksheet.

Not a member? Please sign up to gain complete access.

www.mathworksheets4kids.com