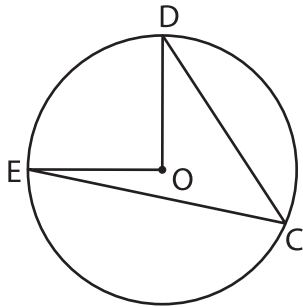


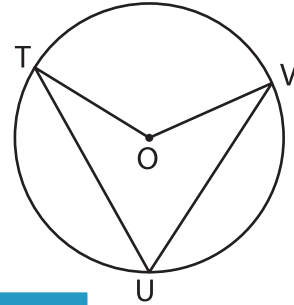
Central and Inscribed Angles

Identify and name the central and inscribed angles in each circle.

1)



2)



Central angle: _____

Inscribed angle: _____

PREVIEW

Gain complete access to the largest collection of worksheets in all subjects!

Members, please log in to download this worksheet.

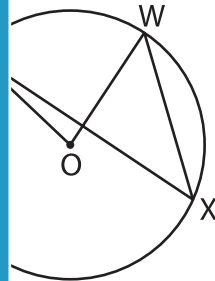
Not a member? Please sign up to gain complete access.

www.mathworksheets4kids.com

: _____

: _____

3)



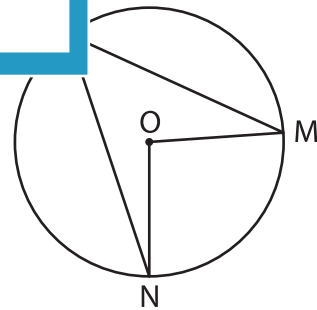
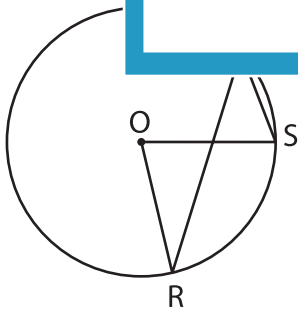
Central angle: _____

Inscribed angle: _____

: _____

: _____

5)



Central angle: _____

Inscribed angle: _____

Central angle: _____

Inscribed angle: _____