


## Comparing Integers


Sheet 2

A) Circle the greater integer in each fish bowl.


1)



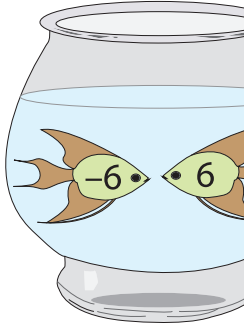
2)



3)



4)




# PREVIEW

Gain complete access to the largest  
collection of worksheets in all subjects!

Members, please  
log in to  
download this  
worksheet.


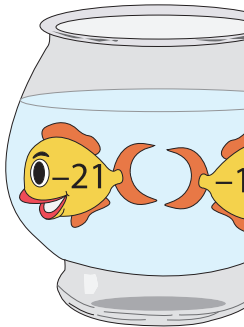
Not a member?  
Please sign up to  
gain complete  
access.

[www.mathworksheets4kids.com](http://www.mathworksheets4kids.com)




B) Circle the smaller integer in each fish bowl.


1)



4)



5)



6)

