

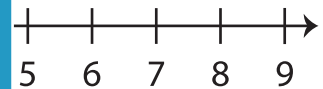
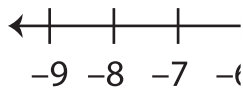
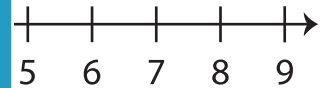
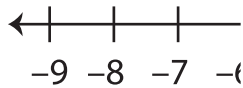
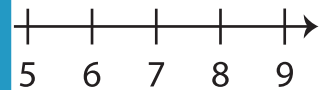
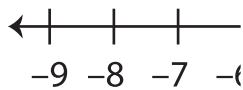
## Opposite Integers

Sheet 2

A) Write the opposite value of each integer.

1) Opposite of  $-31$  \_\_\_\_\_ 2) Opposite of  $14$  \_\_\_\_\_3) Opposite of  $23$  \_\_\_\_\_ 4) Opposite of  $-42$  \_\_\_\_\_5) Opposite of  $-1$  \_\_\_\_\_ 6) Opposite of  $69$  \_\_\_\_\_

B) Mark each integer on the number line.

1)  $-6$ 2)  $4$ 3)  $-9$ 

C) Evaluate each expression.

1) Opposite of  $+(-37)$  \_\_\_\_\_ 2) Opposite of  $-(-41)$  \_\_\_\_\_3) Opposite of  $-(-16)$  \_\_\_\_\_ 4) Opposite of  $+(+5)$  \_\_\_\_\_5) Opposite of  $-(+54)$  \_\_\_\_\_ 6) Opposite of  $-(+22)$  \_\_\_\_\_

# PREVIEW

Gain complete access to the largest  
collection of worksheets in all subjects!

Members, please  
log in to  
download this  
worksheet.

Not a member?  
Please sign up to  
gain complete  
access.

[www.mathworksheets4kids.com](http://www.mathworksheets4kids.com)