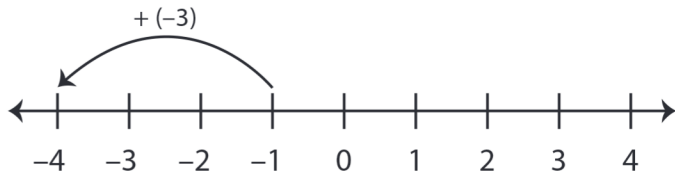


Number Line - Adding Integers

Sheet 2

Example 1: $-1 + (-3) = -4$

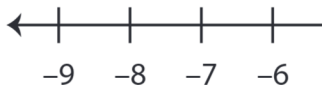


Example 2: $1 + 2 = 3$

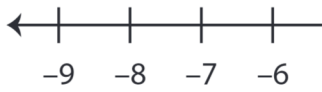


Use the number line to find the sum.

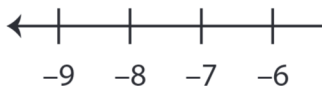
1) $3 + 6 =$ _____



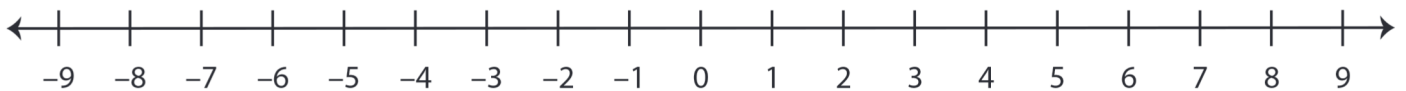
2) $-2 + (-1) =$ _____



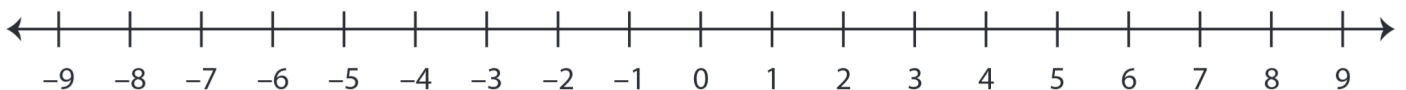
3) $-8 + 10 =$ _____



4) $7 + (-7) =$ _____



5) $5 + 3 =$ _____



PREVIEW

Gain complete access to the largest
collection of worksheets in all subjects!

Members, please
log in to
download this
worksheet.

Not a member?
Please sign up to
gain complete
access.

www.mathworksheets4kids.com