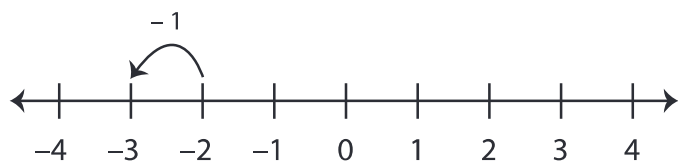
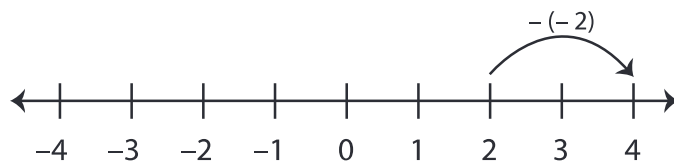


Number Line - Subtracting Integers

Example 1: $-2 - 1 = -3$

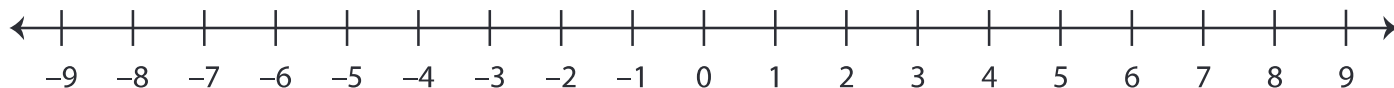


Example 2: $2 - (-2) = 4$

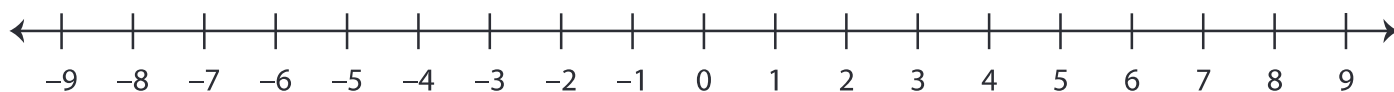


Use the number line to find the difference.

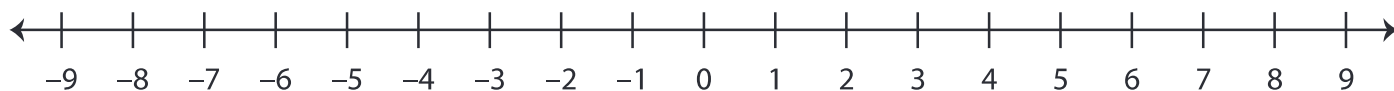
1) $1 - 10 =$ _____



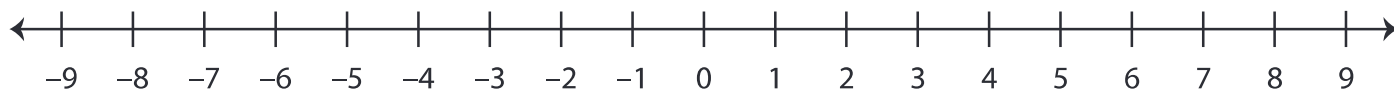
2) $0 - (-7) =$ _____



3) $-6 - 2 =$ _____



4) $5 - 4 =$ _____



5) $-8 - (-3) =$ _____

