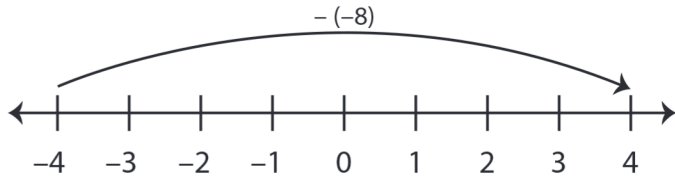


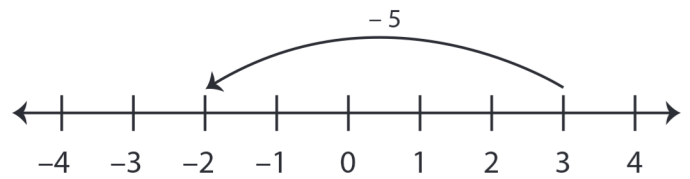
Number Line - Subtracting Integers

Sheet 3

Example 1: $-4 - (-8) = 4$

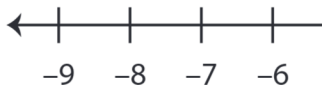


Example 2: $3 - 5 = -2$

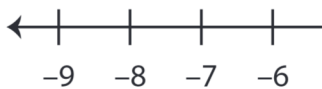


Use the number line to find the difference.

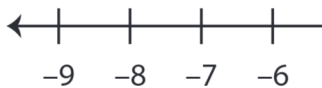
1) $-3 - 3 =$ _____



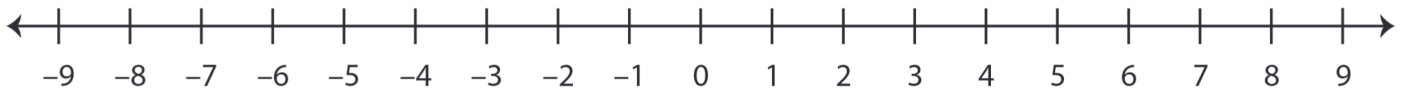
2) $1 - (-6) =$ _____



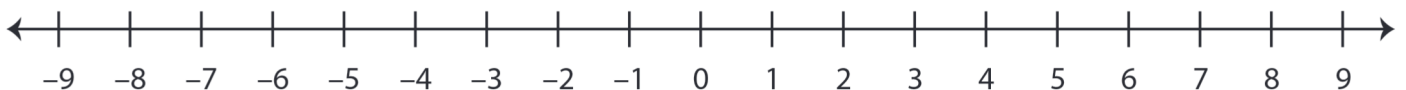
3) $2 - 11 =$ _____



4) $-5 - (-10) =$ _____



5) $-1 - 7 =$ _____



PREVIEW

Gain complete access to the largest
collection of worksheets in all subjects!

Members, please
log in to
download this
worksheet.

Not a member?
Please sign up to
gain complete
access.

www.mathworksheets4kids.com