

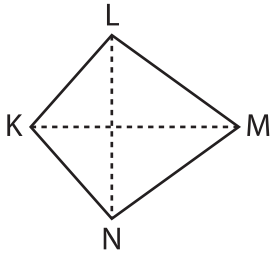
Name : _____

Area of a Kite

T1S4

Find the area of each kite.

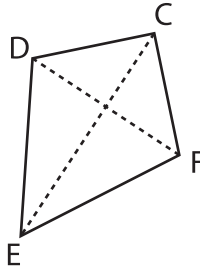
1)



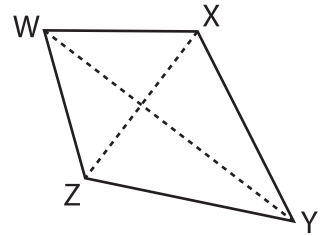
$KM = 80.5$ in, $LN = 78$

Area = _____

2)



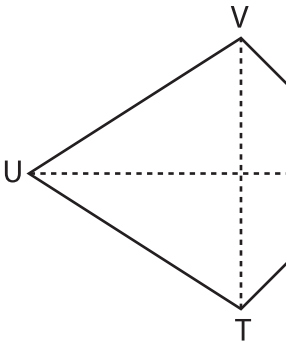
3)



$Z = 15.6$ yd, $WY = 48.2$ yd

Area = _____

4)



$SU = 35.9$ yd, $TV = 30$

Area = _____

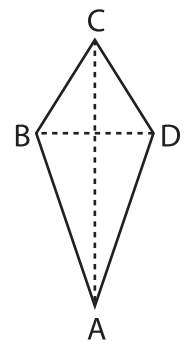
PREVIEW

Gain complete access to the largest collection of worksheets in all subjects!

Members, please log in to download this worksheet.

Not a member? Please sign up to gain complete access.

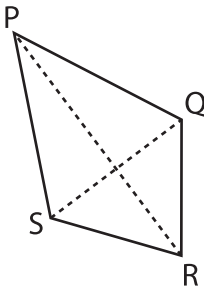
www.mathworksheets4kids.com



$D = 45.3$ ft, $AC = 56.4$ ft

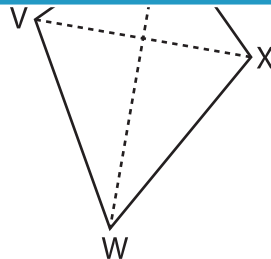
Area = _____

7)



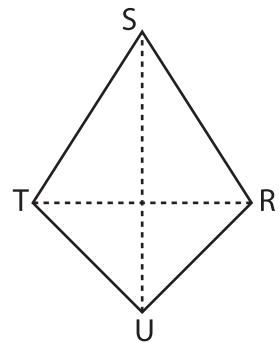
$QS = 19.9$ ft, $PR = 22.2$ ft

Area = _____



$UW = 77.2$ in, $VX = 53.9$ in

Area = _____



$SU = 8.8$ yd, $RT = 7.5$ yd

Area = _____