

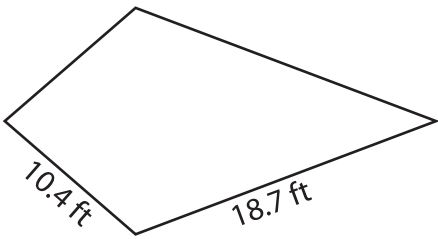
Name : _____

Perimeter of a Kite

Sheet 5

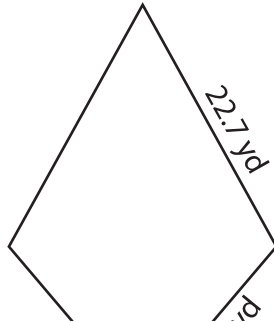
Find the perimeter of each kite.

1)



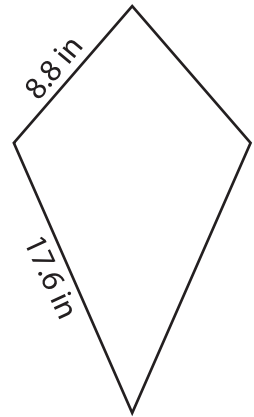
Perimeter = _____

2)



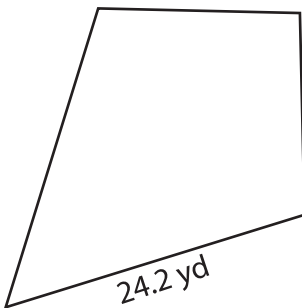
Perimeter = _____

3)

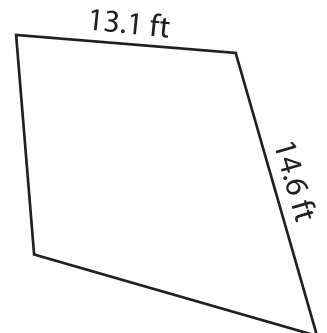


Perimeter = _____

4)



Perimeter = _____



Perimeter = _____

7) If the lengths of the sides are 12.5 ft and 18.7 ft, find the perimeter.

Perimeter = _____

PREVIEW

Gain complete access to the largest collection of worksheets in all subjects!

Members, please log in to download this worksheet.

Not a member? Please sign up to gain complete access.

www.mathworksheets4kids.com

8) Determine the perimeter of the kite, if the sides of the kite measure 5.4 feet and 12.8 feet.
