

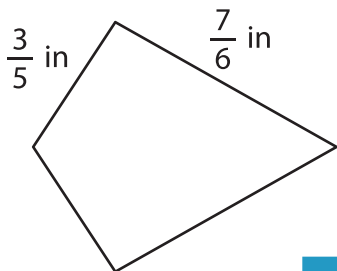
Name : \_\_\_\_\_

## Perimeter of a Kite

Sheet 1

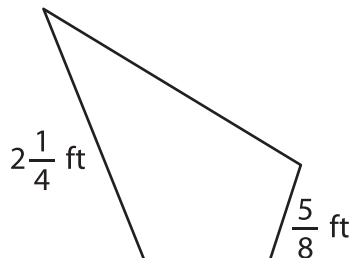
Find the perimeter of each kite.

1)

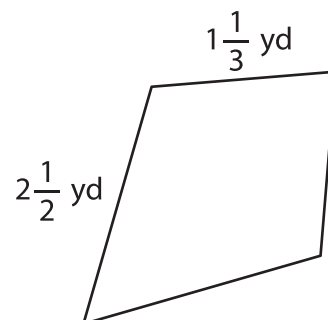


Perimeter =

2)

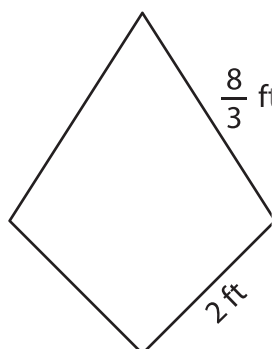


3)



Perimeter =

4)



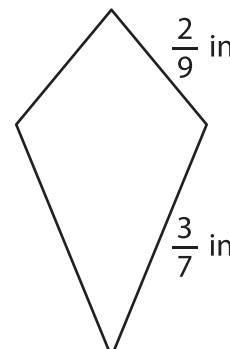
Perimeter =

**PREVIEW**  
Gain complete access to the largest collection of worksheets in all subjects!

Members, please log in to download this worksheet.

Not a member? Please sign up to gain complete access.

[www.mathworksheets4kids.com](http://www.mathworksheets4kids.com)



Perimeter =

7) The side lengths of a kite

the kite?

8) One of the sides of a kite measures  $\frac{1}{5}$  inch. If the other side of the kite measures  $\frac{3}{7}$  inch, find its perimeter.