

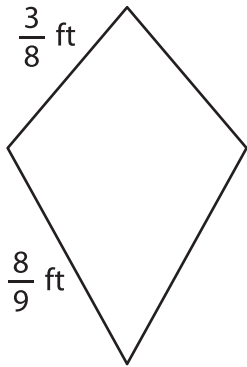
Name : _____

Perimeter of a Kite

Sheet 2

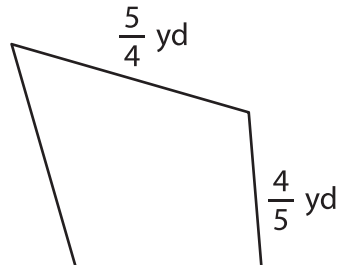
Find the perimeter of each kite.

1)

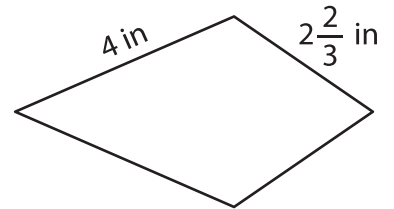


Perimeter =

2)

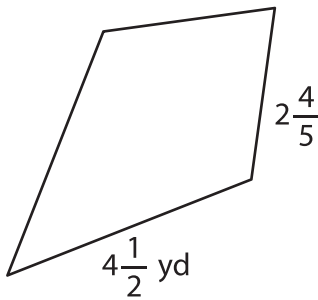


3)



Perimeter =

4)



Perimeter =

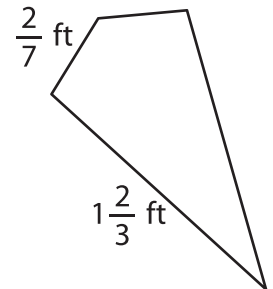
PREVIEW

Gain complete access to the largest collection of worksheets in all subjects!

Members, please log in to download this worksheet.

Not a member? Please sign up to gain complete access.

www.mathworksheets4kids.com



Perimeter =

7) If the lengths of the sides:

Perimeter.

8) Determine the perimeter of the kite, if the sides of the kite measure $\frac{1}{4}$ foot and 3 feet.
