

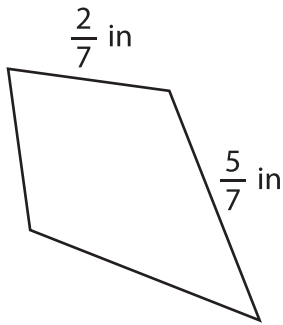
Name : _____

Perimeter of a Kite

Sheet 4

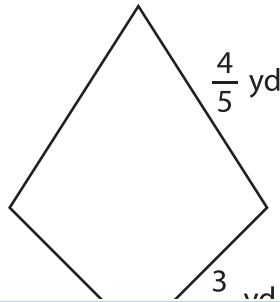
Find the perimeter of each kite.

1)

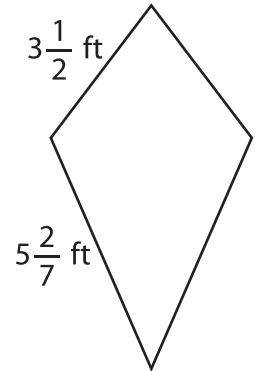


Perimeter =

2)

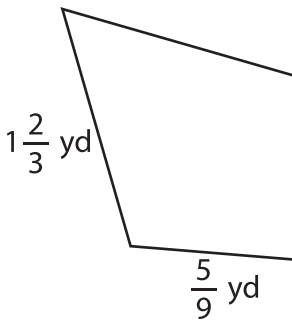


3)



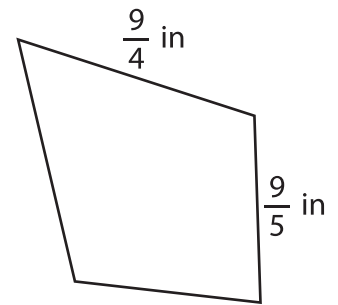
Perimeter =

4)



Perimeter =

7) The side lengths of a kite



Perimeter =

kite?

PREVIEW

Gain complete access to the largest collection of worksheets in all subjects!

Members, please log in to download this worksheet.

Not a member? Please sign up to gain complete access.

www.mathworksheets4kids.com

8) If the lengths of the sides of a kite are $\frac{8}{3}$ inches and $\frac{4}{9}$ inch, find its perimeter.