

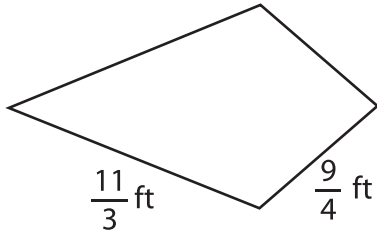
Name : \_\_\_\_\_

## Perimeter of a Kite

Sheet 5

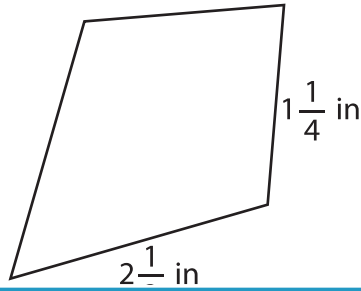
Find the perimeter of each kite.

1)

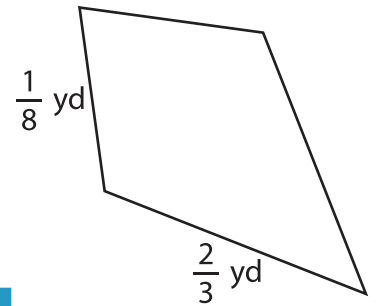


Perimeter =

2)

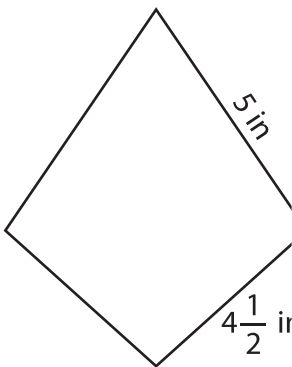


3)



Perimeter =

4)



Perimeter =

7) If the non-congruent sides

\_\_\_\_\_

8) Determine the perimeter of the kite, if the sides of the kite measure  $3\frac{3}{4}$  feet and 7 feet.

\_\_\_\_\_

**PREVIEW**

Gain complete access to the largest collection of worksheets in all subjects!

Members, please log in to download this worksheet.

Not a member? Please sign up to gain complete access.

[www.mathworksheets4kids.com](http://www.mathworksheets4kids.com)

Perimeter =

the perimeter of the kite?