

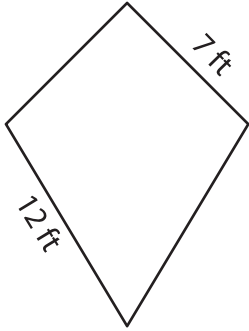
Name : _____

Perimeter of a Kite

L1S1

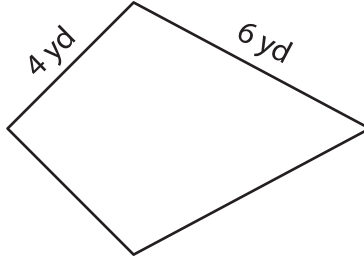
Find the perimeter of each kite.

1)



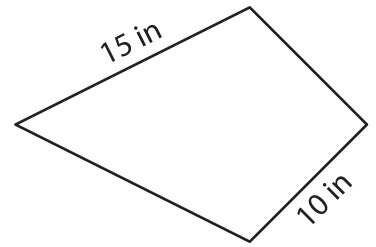
Perimeter = _____

2)



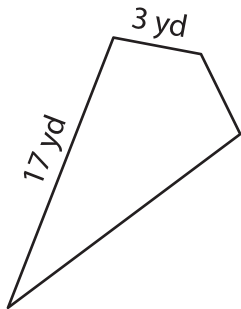
Perimeter = _____

3)



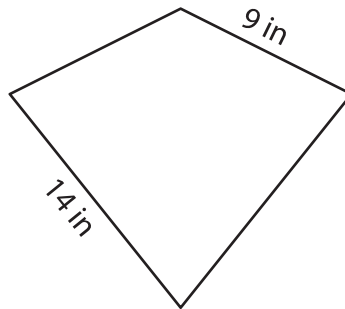
Perimeter = _____

4)



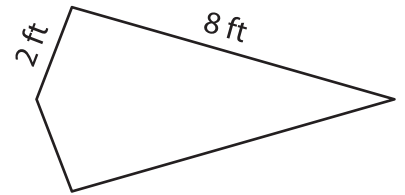
Perimeter = _____

5)



Perimeter = _____

6)



Perimeter = _____

7) If the non-congruent sides of a kite measure 3 yards and 9 yards, what is the perimeter of the kite?

8) One of the sides of a kite measures 13 inches. If the other side of the kite measures 20 inches, find its perimeter.
