

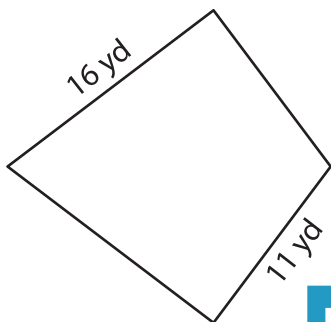
Name : _____

Perimeter of a Kite

L1S3

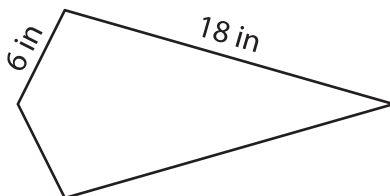
Find the perimeter of each kite.

1)

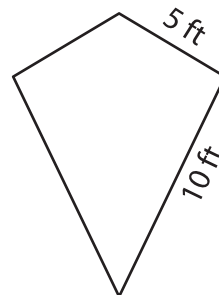


Perimeter = _____

2)

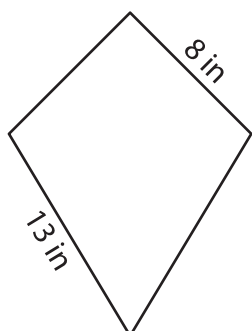


3)



Perimeter = _____

4)



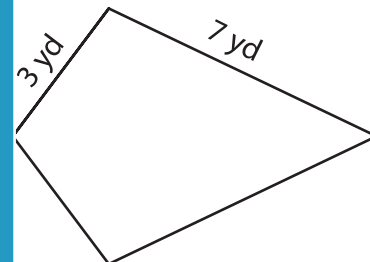
Perimeter = _____

PREVIEW
Gain complete access to the largest collection of worksheets in all subjects!

Members, please log in to download this worksheet.

Not a member? Please sign up to gain complete access.

www.mathworksheets4kids.com



Perimeter = _____

7) If the lengths of the sides:

ter.

8) One of the sides of a kite measures 2 feet. If the other side of the kite measures 9 feet, determine its perimeter.
