

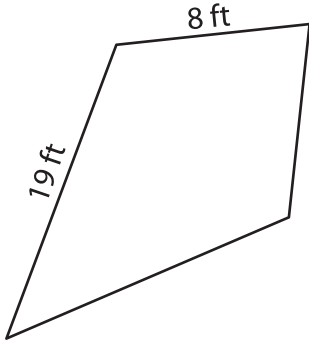
Name : _____

Perimeter of a Kite

L1S5

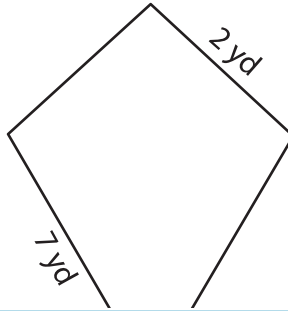
Find the perimeter of each kite.

1)



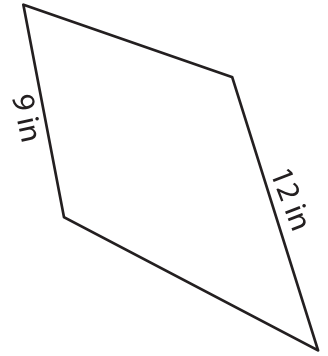
Perimeter = _____

2)

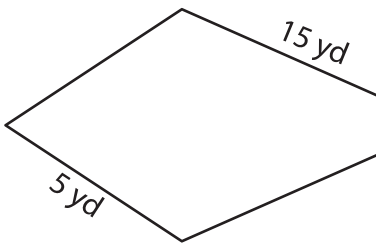


Perimeter = _____

3)



4)



Perimeter = _____

7) The side lengths of a kite

of the kite.

8) If the lengths of the sides of a kite are 10 feet and 19 feet, find its perimeter.

PREVIEW

Gain complete access to the largest collection of worksheets in all subjects!

Members, please log in to download this worksheet.

Not a member? Please sign up to gain complete access.

www.mathworksheets4kids.com