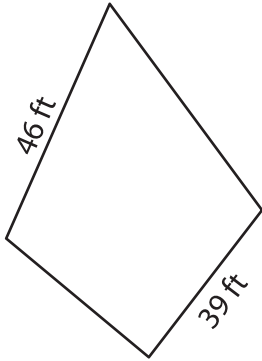


Name : _____

Perimeter of a Kite

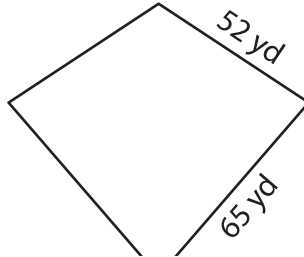
Find the perimeter of each kite.

1)



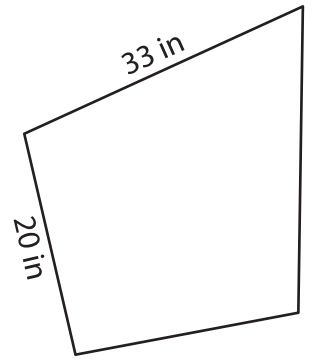
Perimeter = _____

2)

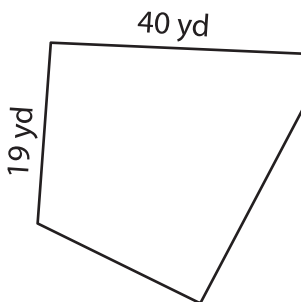


Perimeter = _____

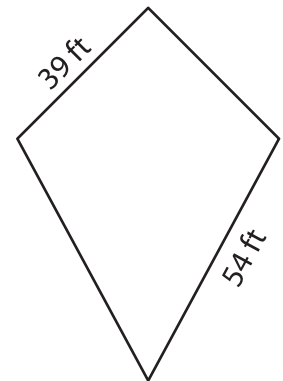
3)



4)



Perimeter = _____



Perimeter = _____

7) What is the perimeter of

www.mathworksheets4kids.com

2 feet?

8) If the non-congruent sides of a kite measure 51 yards and 29 yards, find the perimeter of the kite.

PREVIEW

Gain complete access to the largest collection of worksheets in all subjects!

Members, please log in to download this worksheet.

Not a member? Please sign up to gain complete access.

www.mathworksheets4kids.com