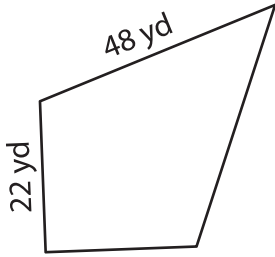


Name : _____

Perimeter of a Kite

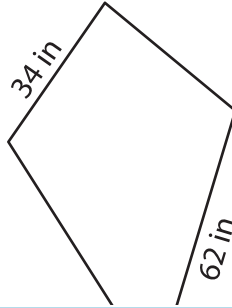
Find the perimeter of each kite.

1)

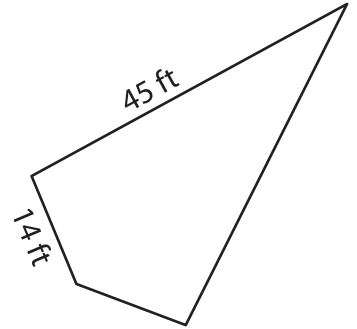


Perimeter = _____

2)

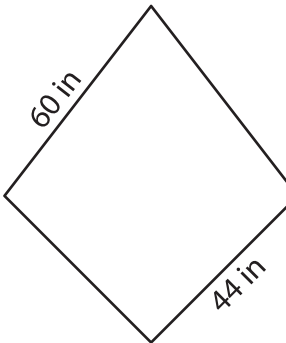


3)



Perimeter = _____

4)



Perimeter = _____

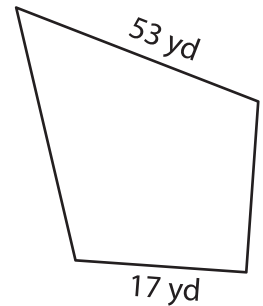
PREVIEW

Gain complete access to the largest collection of worksheets in all subjects!

Members, please log in to download this worksheet.

Not a member? Please sign up to gain complete access.

www.mathworksheets4kids.com



Perimeter = _____

7) One of the sides of a kite is 25 inches long and the other side measures 30 inches, determine its perimeter.

Perimeter = _____

8) If the lengths of the sides of a kite are 23 feet and 16 feet, what is its perimeter?
