

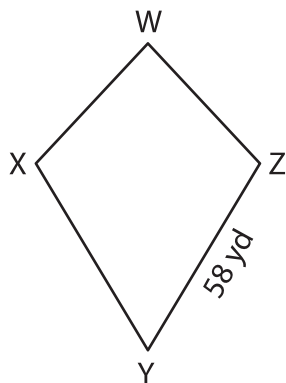
Name : _____

Perimeter of a Kite

Sheet 2

Find the indicated side length of each kite from the given perimeter.

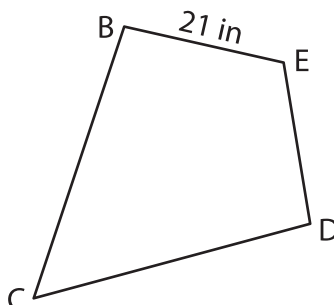
1)



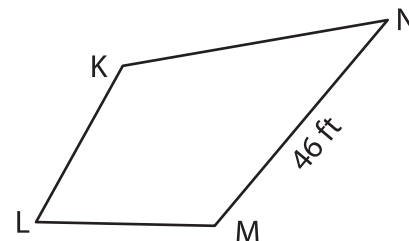
Perimeter = 210 yd

WX = _____

2)



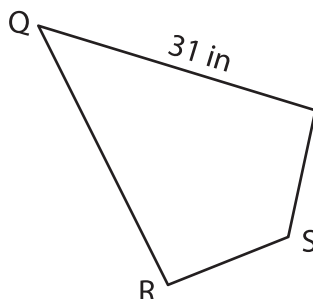
3)



Perimeter = 152 ft

KL = _____

4)



Perimeter = 88 in

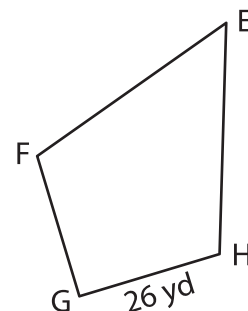
TS = _____

Gain complete access to the largest collection of worksheets in all subjects!

Members, please log in to download this worksheet.

Not a member? Please sign up to gain complete access.

www.mathworksheets4kids.com



Perimeter = 134 yd

EF = _____

7) The length of \overline{AB} in the k

etermine BC.

8) The perimeter of kite TUVW is 314 feet. If $VW = 85$ feet, find the length of \overline{TW} .