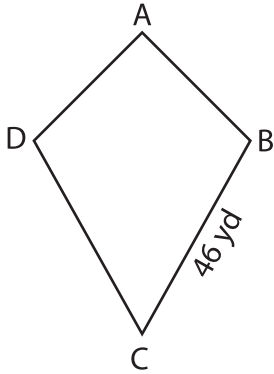


Name : _____

Perimeter of a Kite

Find the indicated side length of each kite from the given perimeter.

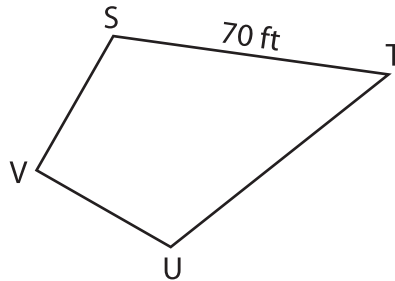
1)



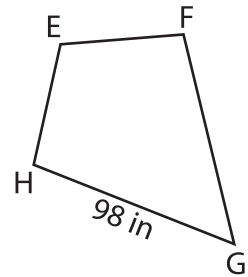
Perimeter = 158 yd

AD = _____

2)



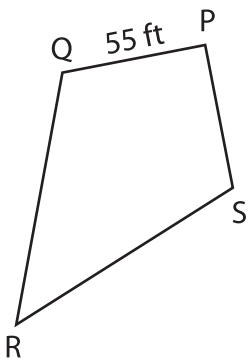
3)



Perimeter = 362 in

EF = _____

4)



Perimeter = 234 ft

RS = _____

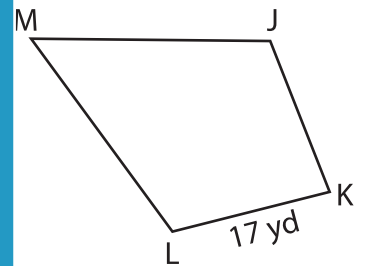
PREVIEW

Gain complete access to the largest collection of worksheets in all subjects!

Members, please log in to download this worksheet.

Not a member? Please sign up to gain complete access.

www.mathworksheets4kids.com



Perimeter = 82 yd

ML = _____

7) TUVW is a kite. Its perimeter is 100 yds.

_____ yds.

8) The length of \overline{EF} in the kite CDEF is 35 inches. If its perimeter is 172 inches, determine CD.
