

Unit of Measurement

Sheet 1

Choose the best unit of measurement.

1) Height of pencil




- feet
- inches

2) Height of house




- feet
- inches

3) Height of giraffe



- inches
- feet

4) Height of pear



- inches
- feet

5) Length of nail



- inches
- feet

6) Height of man




- inches
- feet

7) Length of comb



- feet
- inches

8) Height of tree



- inches
- feet

Answer Key**Unit of Measurement**

Sheet 1

Choose the best unit of measurement.

1) Height of pencil




- feet
- **inches**

2) Height of house




- **feet**
- inches

3) Height of giraffe



- inches
- **feet**

4) Height of pear



- **inches**
- feet

5) Length of nail



- **inches**
- feet

6) Height of man




- inches
- **feet**

7) Length of comb



- feet
- **inches**

8) Height of tree



- inches
- **feet**