



Line Segment - Ruler

Centimeter: S3

Measure the length of each line segment.

1)  cm2)  cm3)  cm4)  cm5)  cm

Draw a line segment for

6) 6 cm

7) 10 cm

8) 14 cm

9) 4 cm

10) 11 cm

PREVIEW

Gain complete access to the largest collection of worksheets in all subjects!

Members, please log in to download this worksheet.

Not a member? Please sign up to gain complete access.

www.mathworksheets4kids.com


Answer Key


Line Segment - Ruler

Centimeter: S3

Note : Answers may vary depending on the printer settings.

Measure the length of each line segment.

1)  13 cm

2)  9 cm

3)  7 cm

4)  3 cm

5)  5 cm

PREVIEW

Gain complete access to the largest collection of worksheets in all subjects!

Members, please log in to download this worksheet.

Not a member? Please sign up to gain complete access.

www.mathworksheets4kids.com

Draw a line segment for

6) 6 cm 

7) 10 cm 

8) 14 cm 

9) 4 cm 

10) 11 cm 