



Line Segment - Ruler

Millimeter: S1

Measure the length of each line segment.

1)  mm2)  mm3)  mm4)  mm5)  mm

Draw a line segment for

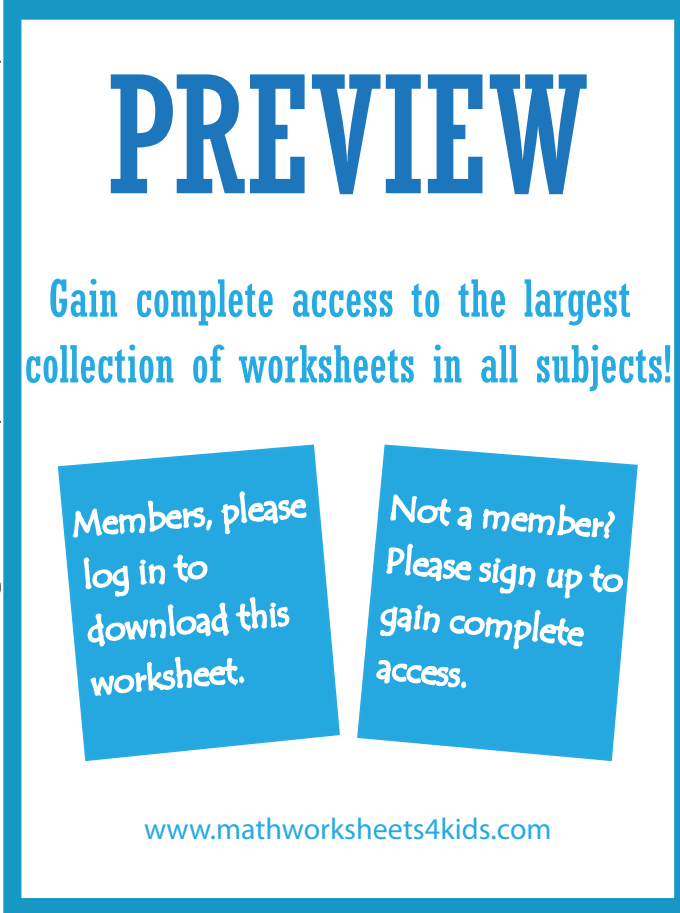
6) 71 mm

7) 107 mm

8) 140 mm

9) 46 mm

10) 110 mm



PREVIEW

Gain complete access to the largest collection of worksheets in all subjects!

Members, please log in to download this worksheet.

Not a member? Please sign up to gain complete access.

www.mathworksheets4kids.com


Answer Key


Line Segment - Ruler

Millimeter: S1

Note : Answers may vary depending on the printer settings.

Measure the length of each line segment.

1)  **135** mm

2)  **90** mm

3)  **68** mm

4)  **34** mm

5)  **50** mm

PREVIEW

Gain complete access to the largest collection of worksheets in all subjects!

Members, please log in to download this worksheet.

Not a member? Please sign up to gain complete access.

www.mathworksheets4kids.com

Draw a line segment for

6) 71 mm 

7) 107 mm 

8) 140 mm 

9) 46 mm 

10) 110 mm 