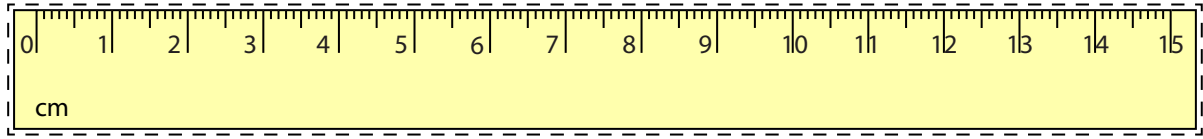



**Line Segment - Ruler**

Millimeter: 52



Cut out the ruler. Measure the length of each line segment.

1)   mm

2)   mm

3)   mm

4)   mm

5)   mm

Draw a line segment for

6) 55 mm

7) 72 mm

8) 140 mm

9) 108 mm

10) 30 mm

# PREVIEW

Gain complete access to the largest collection of worksheets in all subjects!

Members, please  
log in to  
download this  
worksheet.

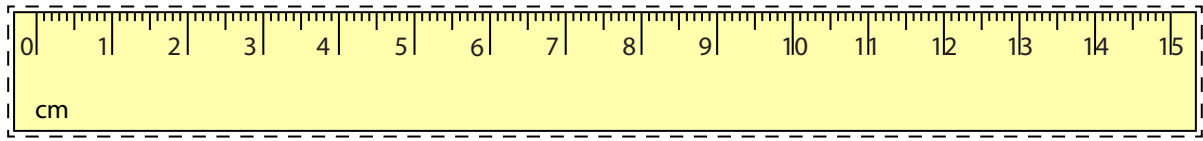
Not a member?  
Please sign up to  
gain complete  
access.

www.mathworksheets4kids.com


**Answer Key**

**Line Segment - Ruler**

Millimeter: 52



Cut out the ruler. Measure the length of each line segment.

1)  **119** mm

2)  **43** mm

3)  **90** mm

4)  **65** mm

5)  **120** mm

Draw a line segment for

6) 55 mm 

7) 72 mm 

8) 140 mm 

9) 108 mm 

10) 30 mm 

# PREVIEW

Gain complete access to the largest collection of worksheets in all subjects!

Members, please log in to download this worksheet.

Not a member? Please sign up to gain complete access.

[www.mathworksheets4kids.com](http://www.mathworksheets4kids.com)