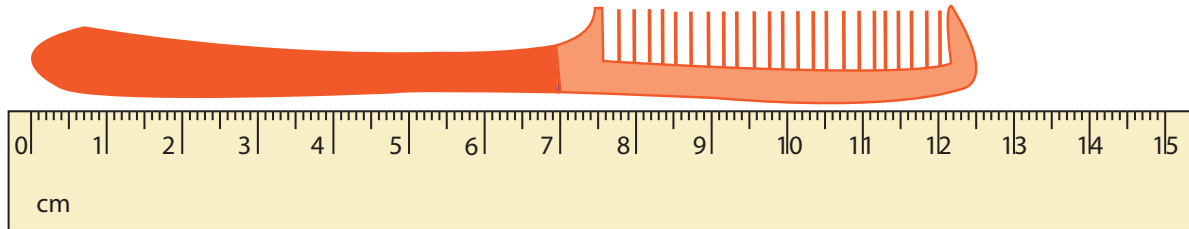


**Measuring Objects**

Half centimeter: S1

Measure each object to the nearest half centimeter.

1)



\_\_\_\_\_

2)



\_\_\_\_\_

3)



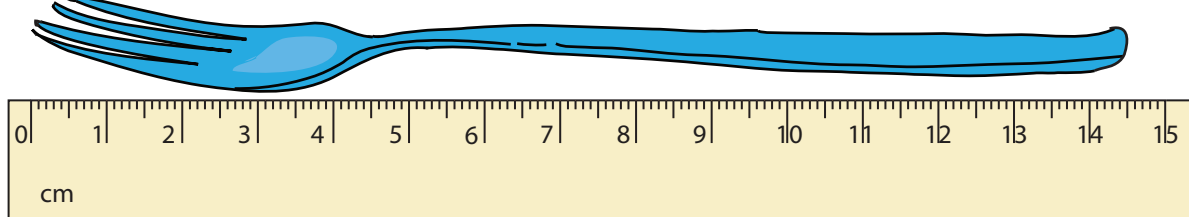
\_\_\_\_\_

4)



\_\_\_\_\_

5)



\_\_\_\_\_

**PREVIEW**

Gain complete access to the largest collection of worksheets in all subjects!

Members, please log in to download this worksheet.

Not a member? Please sign up to gain complete access.

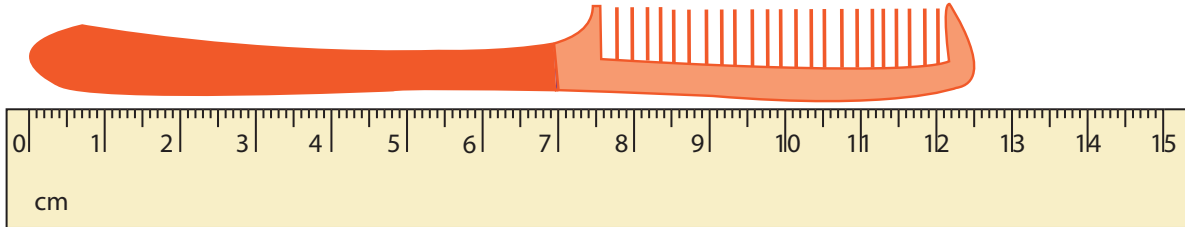
[www.mathworksheets4kids.com](http://www.mathworksheets4kids.com)

**Measuring Objects**

Half centimeter: S1

Measure each object to the nearest half centimeter.

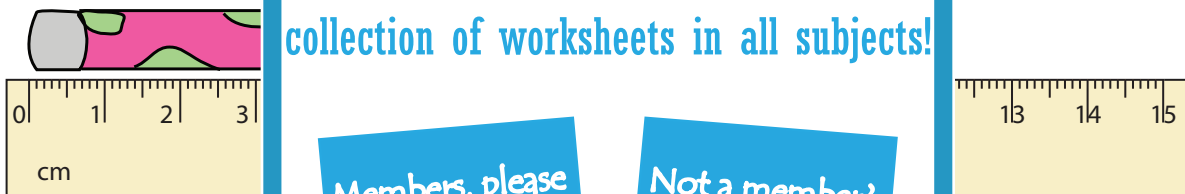
1)

**12.5 cm or  $12 \frac{1}{2}$  cm**

2)

**4.5 cm or 4  $\frac{1}{2}$  cm**

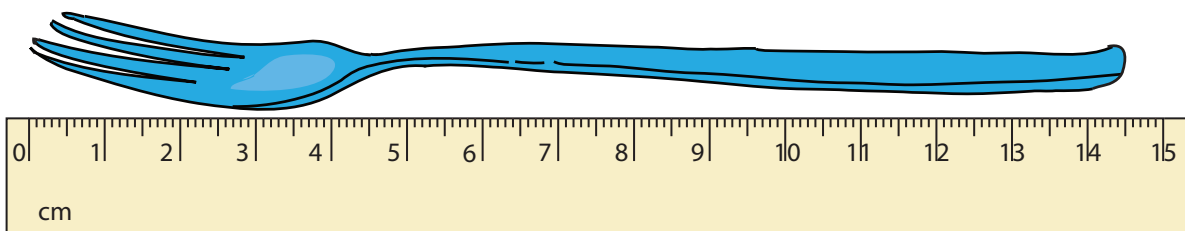
3)

**7.5 cm or 7  $\frac{1}{2}$  cm**

4)

**9.5 cm or  $9 \frac{1}{2}$  cm**

5)

**14.5 cm or  $14 \frac{1}{2}$  cm****PREVIEW**

Gain complete access to the largest collection of worksheets in all subjects!

Members, please log in to download this worksheet.

Not a member? Please sign up to gain complete access.

[www.mathworksheets4kids.com](http://www.mathworksheets4kids.com)