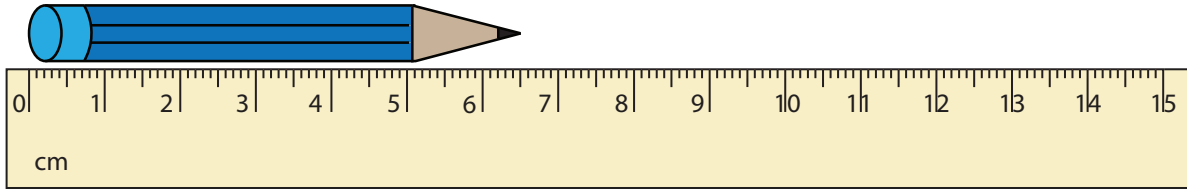


**Measuring Objects**

Half centimeter: S3

Measure each object to the nearest half centimeter.

1)



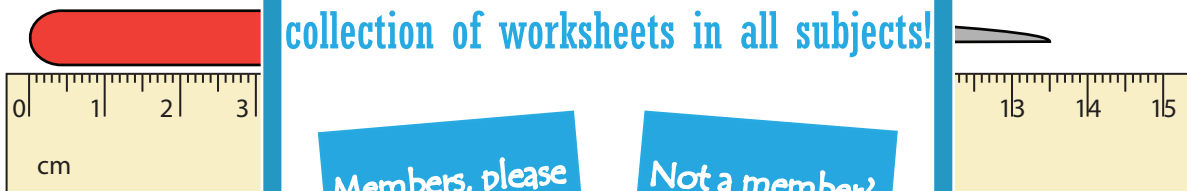
\_\_\_\_\_

2)



\_\_\_\_\_

3)



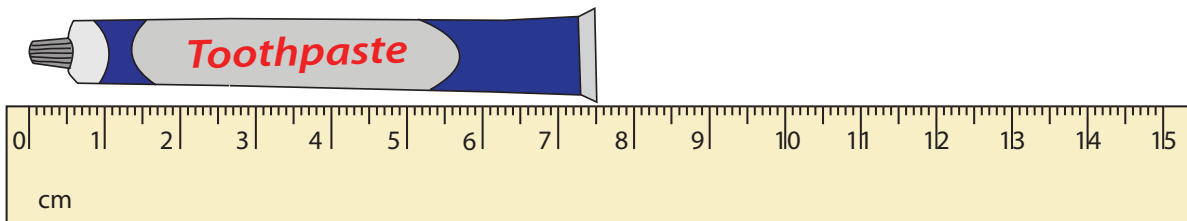
\_\_\_\_\_

4)



\_\_\_\_\_

5)



\_\_\_\_\_

**PREVIEW**

Gain complete access to the largest collection of worksheets in all subjects!

Members, please log in to download this worksheet.

Not a member? Please sign up to gain complete access.

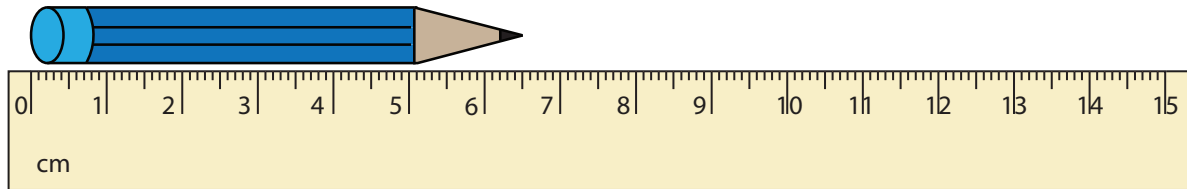
[www.mathworksheets4kids.com](http://www.mathworksheets4kids.com)

## Measuring Objects

Half centimeter: S3

Measure each object to the nearest half centimeter.

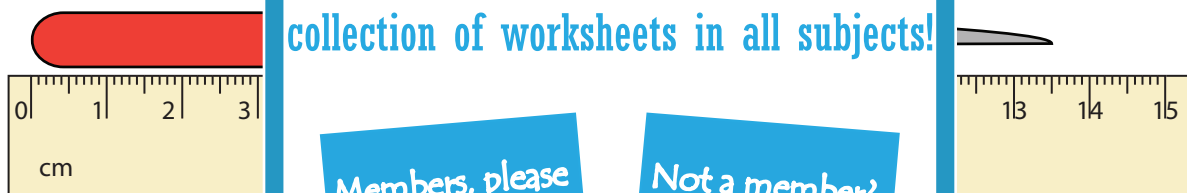
1)

6.5 cm or  $6\frac{1}{2}$  cm

2)

4.5 cm or 4

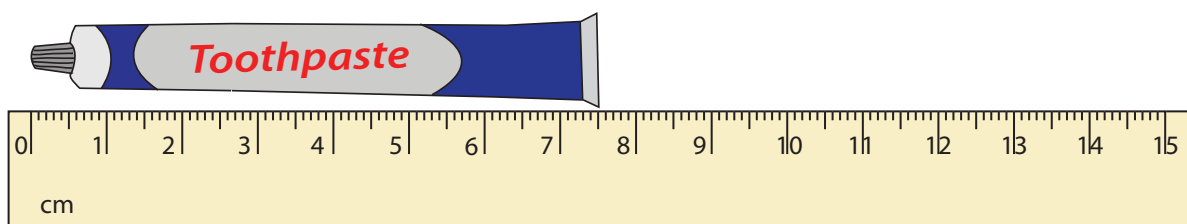
3)

13.5 cm or 13

4)

10.5 cm or  $10\frac{1}{2}$  cm

5)

7.5 cm or  $7\frac{1}{2}$  cm