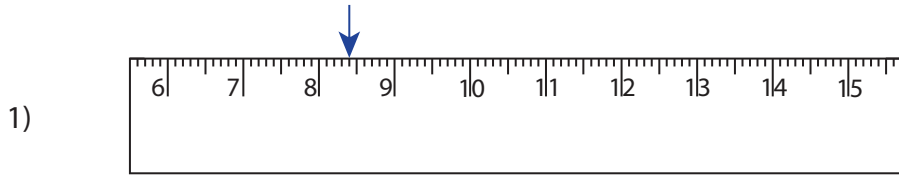
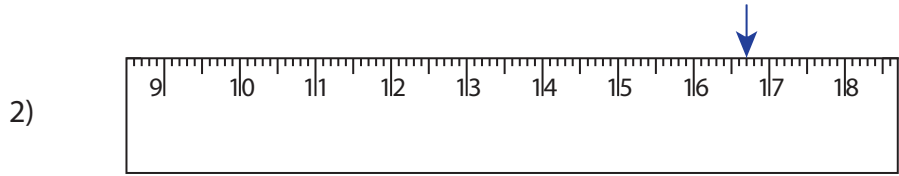


Reading & Marking Ruler

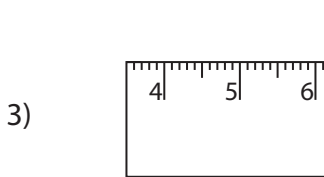
Write the reading shown by the pointer in each problem.



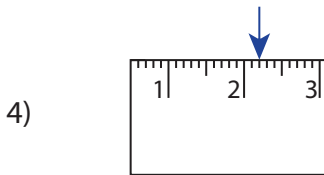
_____ cm _____ mm



_____ cm _____ mm



_____ cm _____ mm



_____ cm _____ mm

PREVIEW

Gain complete access to the largest collection of worksheets in all subjects!

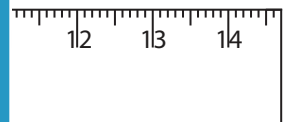
Members, please log in to download this worksheet.

Not a member? Please sign up to gain complete access.

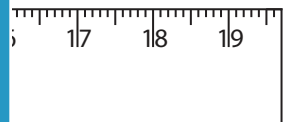
www.mathworksheets4kids.com

Draw the pointer to show


5) 6 cm 9 mm




6) 18 cm 1 mm



7) 3 cm 3 mm

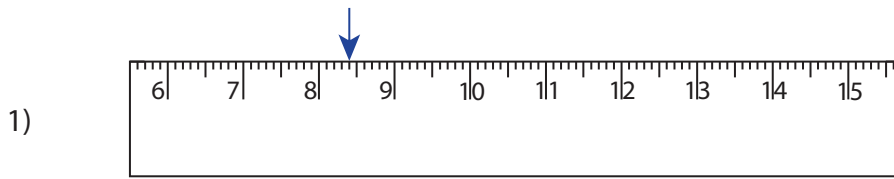

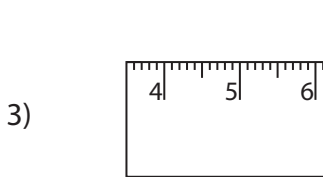



8) 15 cm 8 mm



Reading & Marking Ruler

Write the reading shown by the pointer in each problem.

8 cm 4 mm16 cm 7 mm9 cm 5 mm2 cm 2 mm

PREVIEW

Gain complete access to the largest collection of worksheets in all subjects!

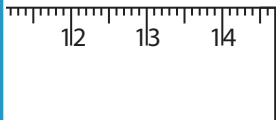
Members, please log in to download this worksheet.

Not a member? Please sign up to gain complete access.

www.mathworksheets4kids.com

Draw the pointer to show

5) 6 cm 9 mm



6) 18 cm 1 mm



7) 3 cm 3 mm



8) 15 cm 8 mm

