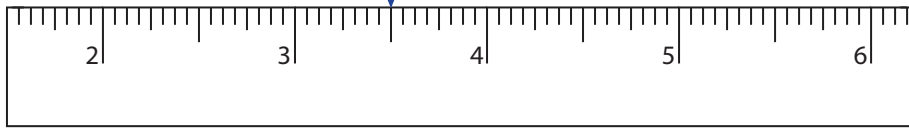


**Reading & Marking Ruler**

Halves and Quarters: S2

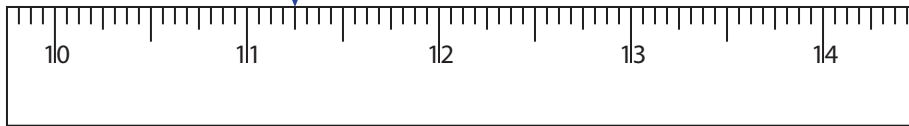
Write the reading shown by the pointer in each problem.

1)



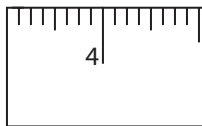
\_\_\_\_\_ in

2)



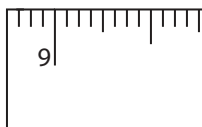
\_\_\_\_\_ in

3)




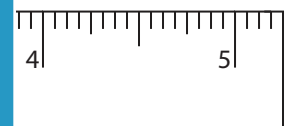

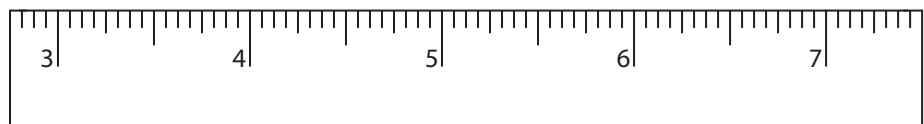
\_\_\_\_\_ in

4)



\_\_\_\_\_ in

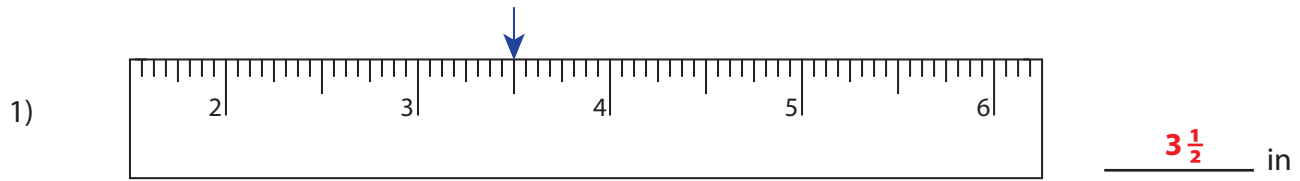
Draw the pointer to show

5)  $15\frac{1}{2}$  in6)  $2\frac{3}{4}$  in7)  $16\frac{1}{2}$  in8)  $4\frac{1}{4}$  in**PREVIEW**Gain complete access to the largest  
collection of worksheets in all subjects!Members, please  
log in to  
download this  
worksheet.Not a member?  
Please sign up to  
gain complete  
access.[www.mathworksheets4kids.com](http://www.mathworksheets4kids.com)

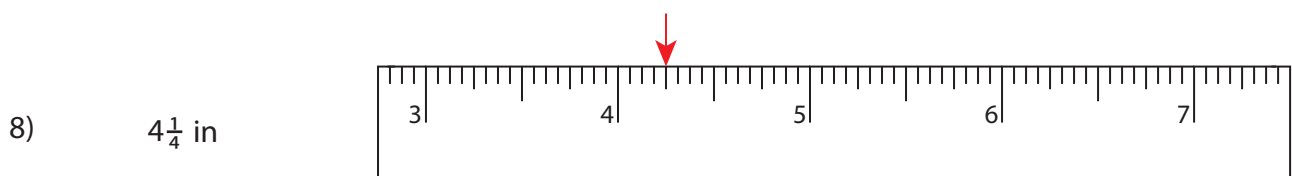
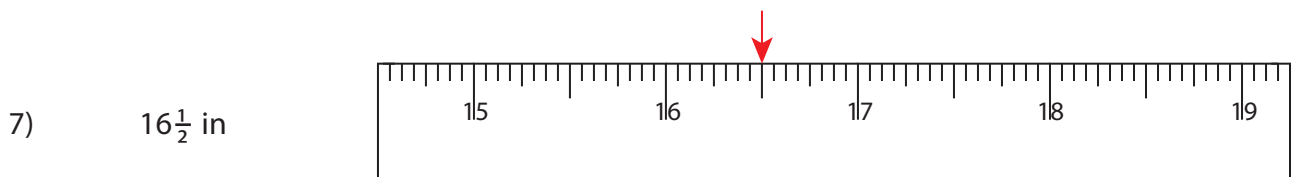
## Reading &amp; Marking Ruler

Halves and Quarters: S2

Write the reading shown by the pointer in each problem.



Draw the pointer to show



**PREVIEW**

Gain complete access to the largest collection of worksheets in all subjects!

Members, please log in to download this worksheet.

Not a member? Please sign up to gain complete access.

[www.mathworksheets4kids.com](http://www.mathworksheets4kids.com)