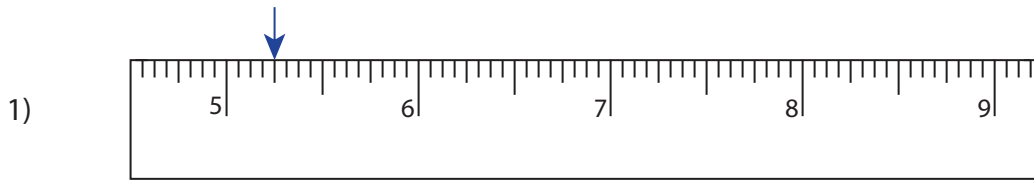


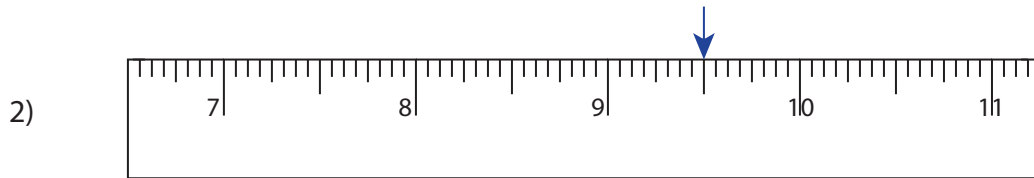
**Reading & Marking Ruler**

Halves and Quarters: S3

Write the reading shown by the pointer in each problem.



\_\_\_\_\_ in



\_\_\_\_\_ in



\_\_\_\_\_ in



\_\_\_\_\_ in

**PREVIEW**

Gain complete access to the largest collection of worksheets in all subjects!

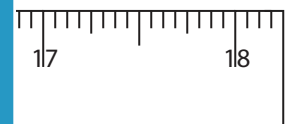
Members, please log in to download this worksheet.

Not a member? Please sign up to gain complete access.

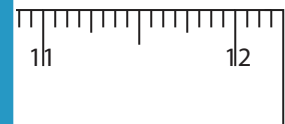
[www.mathworksheets4kids.com](http://www.mathworksheets4kids.com)

Draw the pointer to show

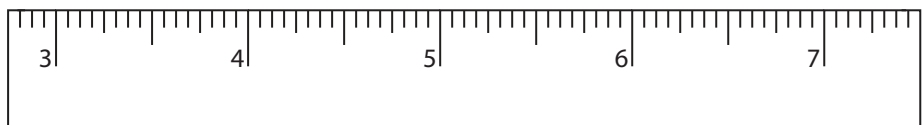
5)  $16\frac{1}{2}$  in



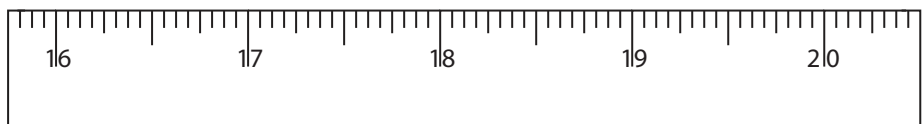
6)  $10\frac{1}{4}$  in



7)  $5\frac{3}{4}$  in



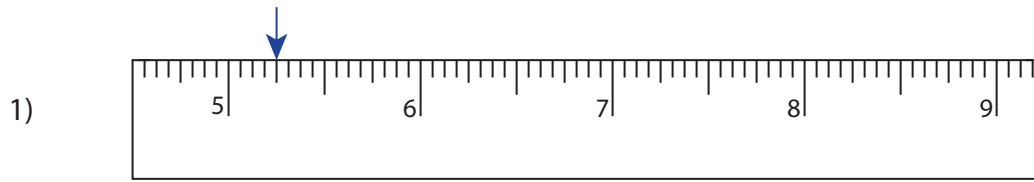
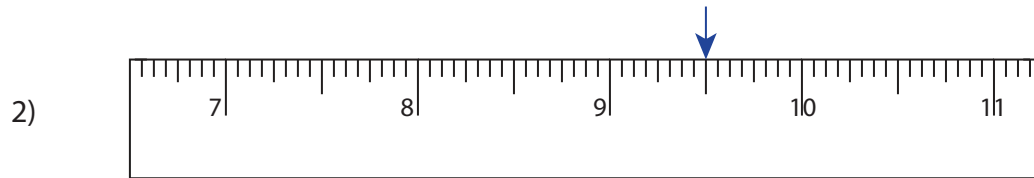
8)  $18\frac{1}{4}$  in



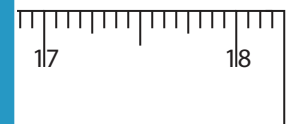
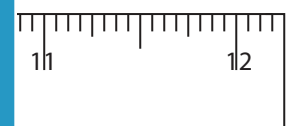
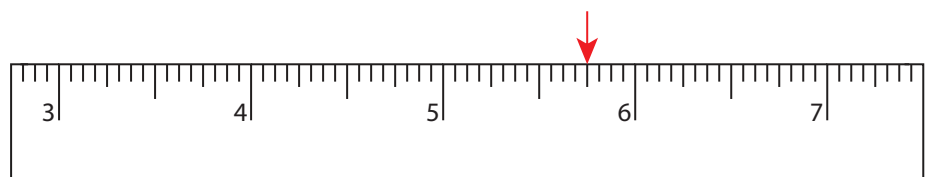
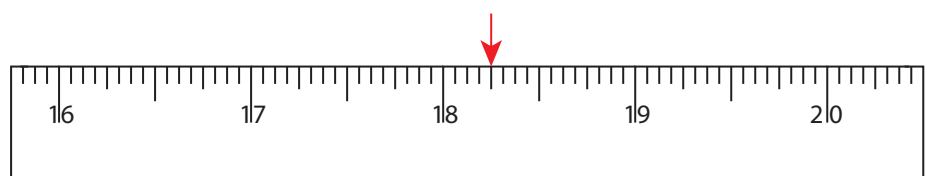
## Reading &amp; Marking Ruler

Halves and Quarters: S3

Write the reading shown by the pointer in each problem.

5  $\frac{1}{4}$  in9  $\frac{1}{2}$  in14  $\frac{1}{4}$  in7  $\frac{3}{4}$  in

Draw the pointer to show

5) 16  $\frac{1}{2}$  in6) 10  $\frac{1}{4}$  in7) 5  $\frac{3}{4}$  in8) 18  $\frac{1}{4}$  in

**PREVIEW**

Gain complete access to the largest collection of worksheets in all subjects!

Members, please log in to download this worksheet.

Not a member? Please sign up to gain complete access.

[www.mathworksheets4kids.com](http://www.mathworksheets4kids.com)