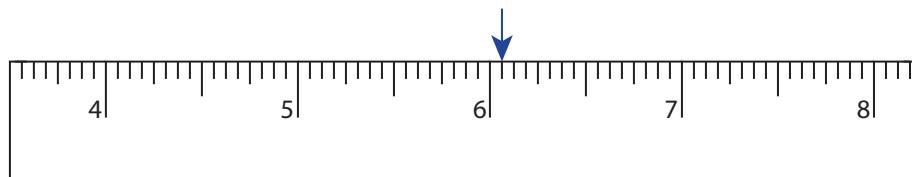


Reading & Marking Ruler

One-Sixteenth: S1

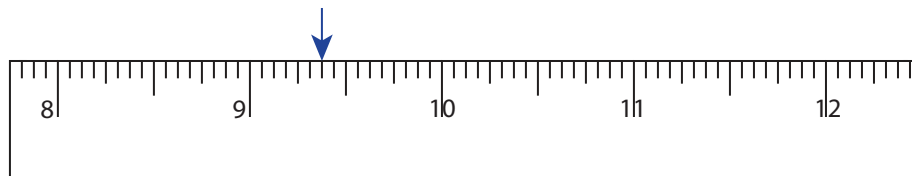
Write the reading shown by the pointer in each problem.

1)



_____ in

2)



_____ in

3)



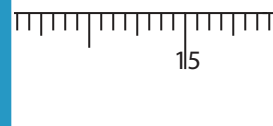
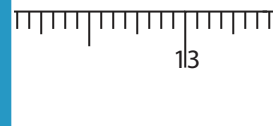
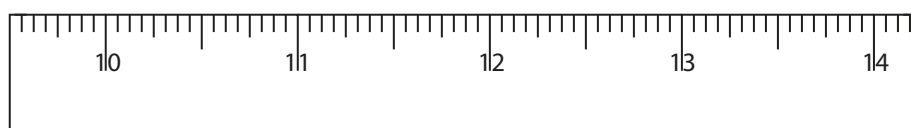
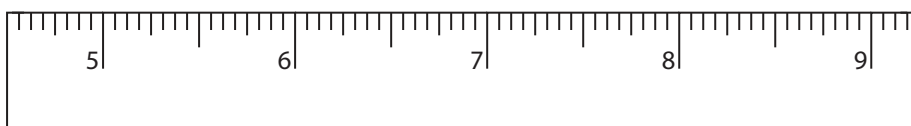
_____ in

4)



_____ in

Draw the pointer to show

5) $12\frac{7}{8}$ in6) $11\frac{5}{16}$ in7) $10\frac{5}{8}$ in8) $7\frac{15}{16}$ in

PREVIEW

Gain complete access to the largest collection of worksheets in all subjects!

Members, please
log in to
download this
worksheet.

Not a member?
Please sign up to
gain complete
access.

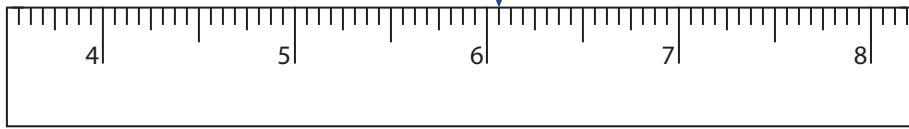
www.mathworksheets4kids.com

Reading & Marking Ruler

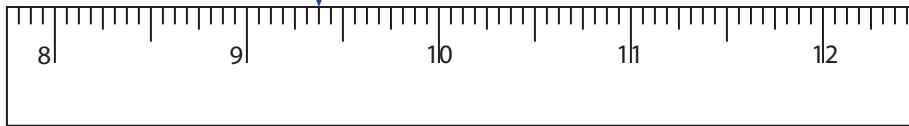
One-Sixteenth: S1

Write the reading shown by the pointer in each problem.


1)

6 $\frac{1}{16}$ in

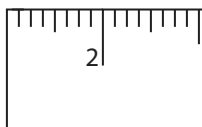
2)

9 $\frac{3}{8}$ in


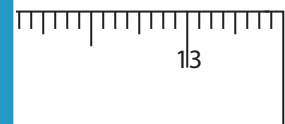
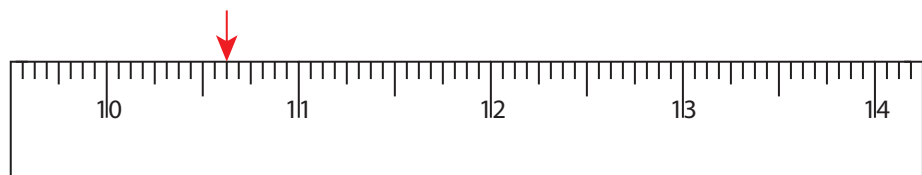
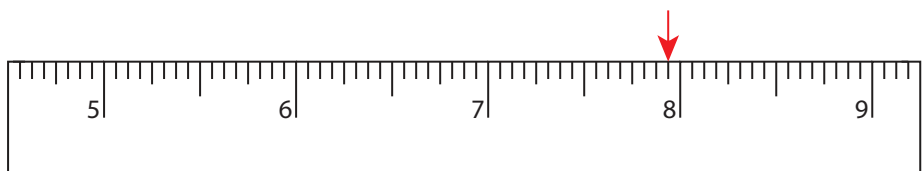
3)

15 $\frac{9}{16}$ in

4)

3 $\frac{1}{8}$ in

Draw the pointer to show

5) $12 \frac{7}{8}$ in6) $11 \frac{5}{16}$ in7) $10 \frac{5}{8}$ in8) $7 \frac{15}{16}$ in

PREVIEW

Gain complete access to the largest collection of worksheets in all subjects!

Members, please log in to download this worksheet.

Not a member? Please sign up to gain complete access.

www.mathworksheets4kids.com