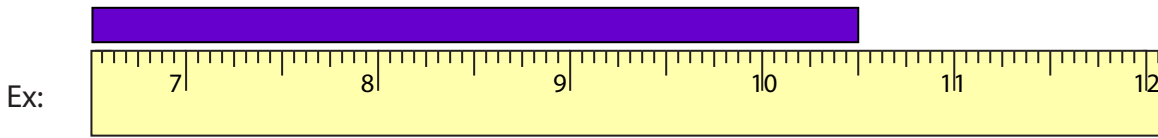


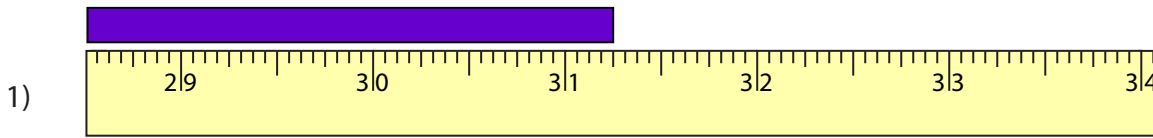
Reading Tapes

Halves and Quarters: S2

Measure the length of each bar.



_____ $10 \frac{1}{2}$ in



_____ in



_____ in



_____ in



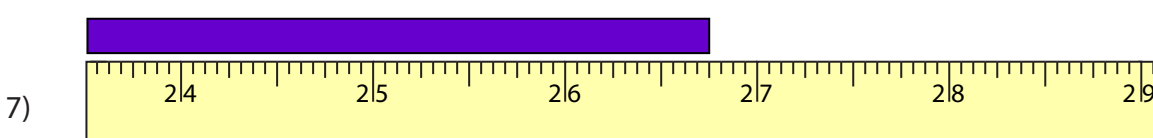
_____ in



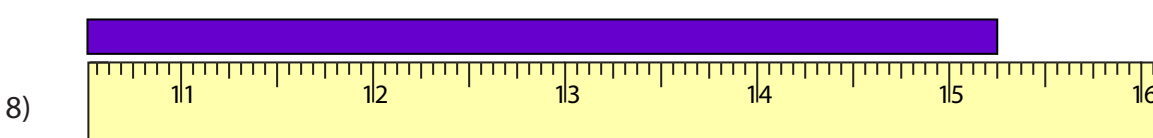
_____ in



_____ in



_____ in



_____ in

PREVIEW

Gain complete access to the largest collection of worksheets in all subjects!

Members, please log in to download this worksheet.

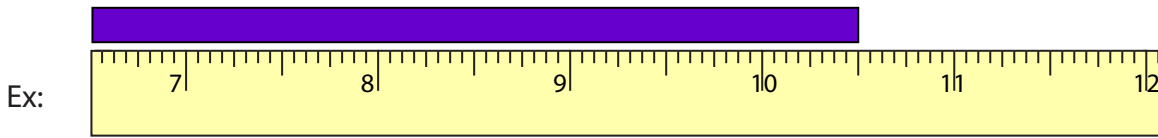
Not a member? Please sign up to gain complete access.

www.mathworksheets4kids.com

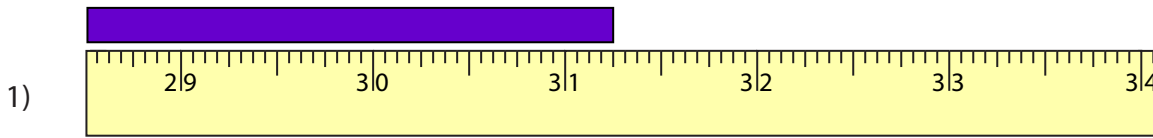
Reading Tapes

Halves and Quarters: S2

Measure the length of each bar.



10 $\frac{1}{2}$ in



31 $\frac{1}{4}$ in



44 $\frac{1}{2}$ in



21 $\frac{3}{4}$ in



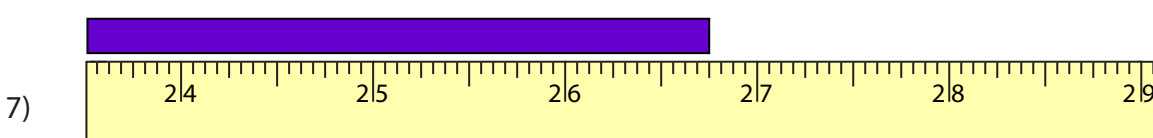
35 $\frac{1}{4}$ in



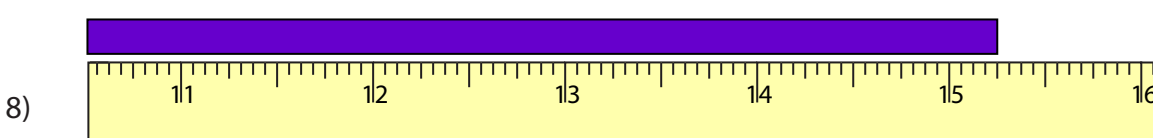
13 $\frac{3}{4}$ in



17 $\frac{1}{2}$ in



26 $\frac{3}{4}$ in



15 $\frac{1}{4}$ in

PREVIEW

Gain complete access to the largest collection of worksheets in all subjects!

Members, please log in to download this worksheet.

Not a member? Please sign up to gain complete access.

www.mathworksheets4kids.com