





Make and Interpret

Shirley goes on an Indian jungle safari with her family, where she spots lions, tigers, elephants, and rhinos. She counts the number of wild animals she spotted. Make a line plot with the given data and answer the questions below.

Tigers	Rhinos	Lions	Elephants
			
2	4	5	3

PREVIEW

Gain complete access to the largest collection of worksheets in all subjects!

Members, please log in to download this worksheet.

Not a member? Please sign up to gain complete access.

www.mathworksheets4kids.com

- 1) How many elephants did she spot in the jungle safari? _____
- 2) How many wild animals did she spot in all? _____
- 3) Shirley spotted 4 of these animals. Name the wild animal. _____
- 4) How many big cats did she spot altogether? _____
- 5) Which was the most frequently spotted wild animal? _____