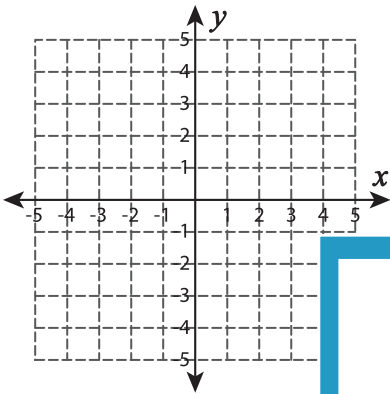


# Graphing: Two Points

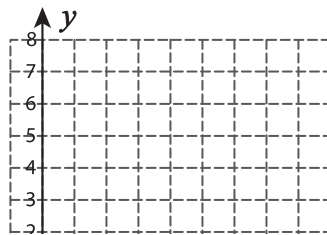
Sheet 2

Graph the line using the given points.

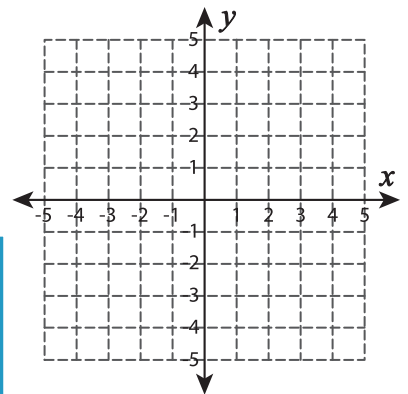
1)  $(-5, 2)$  and  $(5, -4)$



2)  $(7, 6)$  and  $(8, 7)$



3)  $(-2, 2)$  and  $(0, 0)$



# PREVIEW

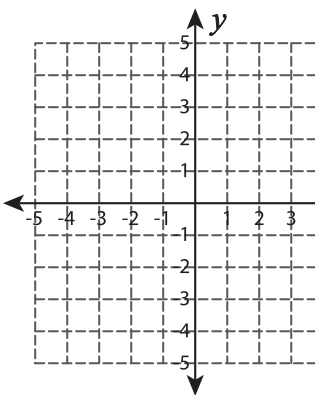
Gain complete access to the largest  
collection of worksheets in all subjects!

Members, please  
log in to  
download this  
worksheet.

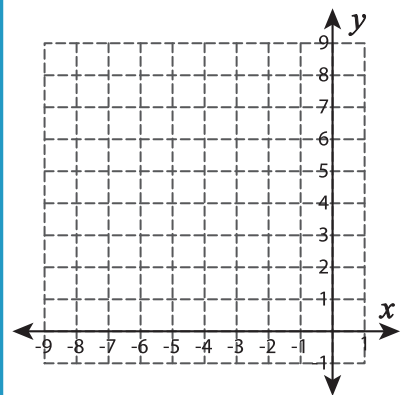
Not a member?  
Please sign up to  
gain complete  
access.

[www.mathworksheets4kids.com](http://www.mathworksheets4kids.com)

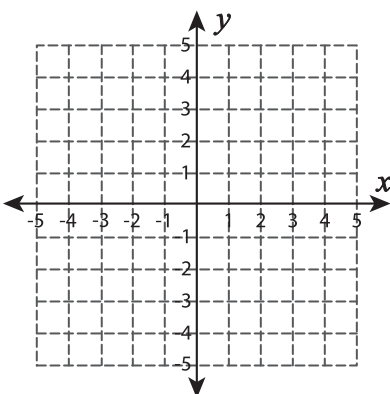
4)  $(0, 3)$  and  $(4, -1)$



5)  $(-6, 4)$  and  $(-3, 5)$



7)  $(3, 1)$  and  $(4, -3)$



8)  $(8, 2)$  and  $(8, -2)$

