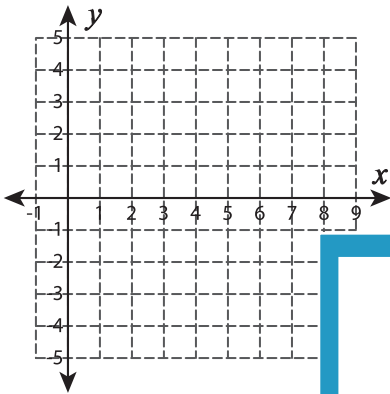


# Graphing: Two Points

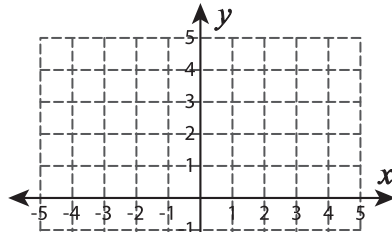
Sheet 3

Graph the line using the given points.

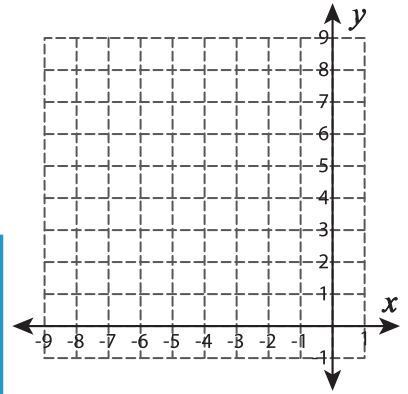
1)  $(2, 1)$  and  $(5, -2)$



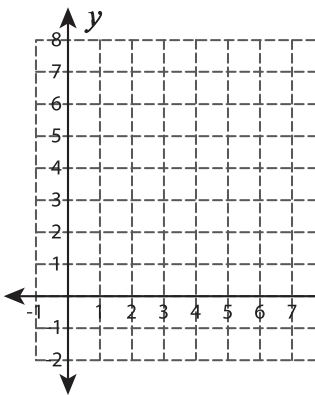
2)  $(-4, -4)$  and  $(1, 1)$



3)  $(-4, 2)$  and  $(-6, 4)$



4)  $(2, 6)$  and  $(7, 2)$



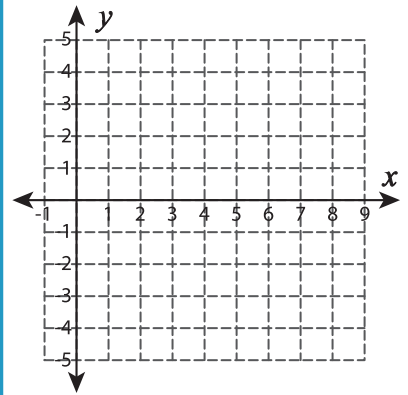
**PREVIEW**  
Gain complete access to the largest  
collection of worksheets in all subjects!

Members, please  
log in to  
download this  
worksheet.

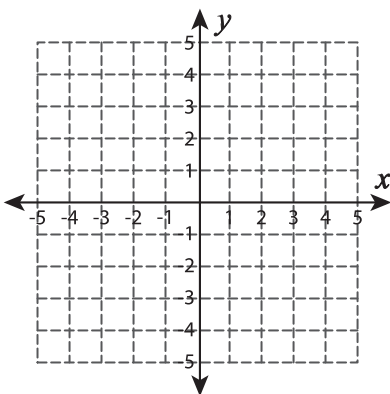
Not a member?  
Please sign up to  
gain complete  
access.

[www.mathworksheets4kids.com](http://www.mathworksheets4kids.com)

5)  $(5, 1)$  and  $(7, 3)$



7)  $(-4, 3)$  and  $(-1, -3)$



8)  $(-2, -4)$  and  $(4, 3)$

