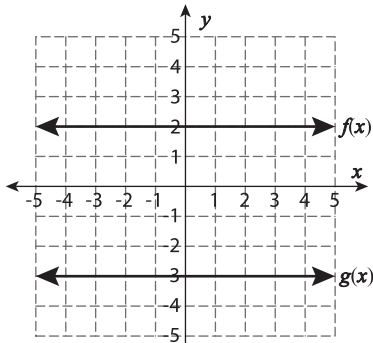


MCQ

If $g(x)$ is the translation of $f(x)$, Identify the translation.

1)



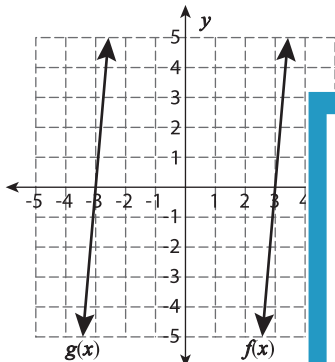
a) 5 units right

b) 5 units left

c) 5 units up

d) 5 units down

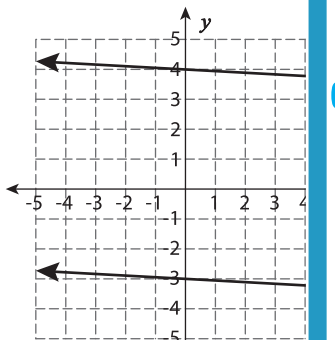
2)



) 6 units left

) 7 units down

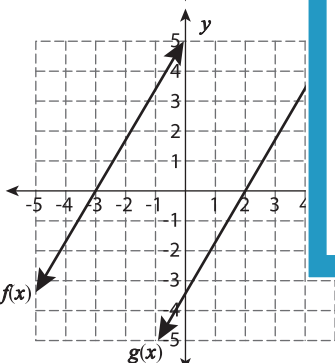
3)



) 7 units left

) 9 units down

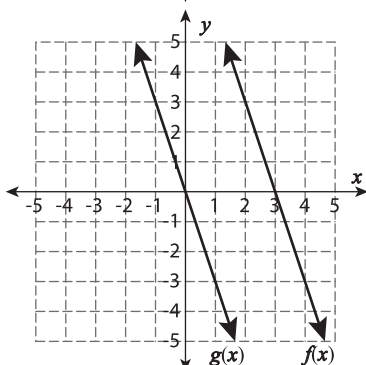
4)



) 3 units down

) 9 units left

5)



a) 3 units right

b) 3 units left

c) 3 units up

d) 3 units down

PREVIEW

Gain complete access to the largest
collection of worksheets in all subjects!

Members, please
log in to
download this
worksheet.

Not a member?
Please sign up to
gain complete
access.

www.mathworksheets4kids.com