


Name : _____

Long vs Short

Sheet 3


1. Which is shorter?



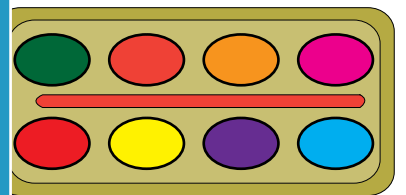
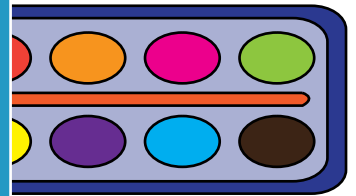
2. Which is longer?



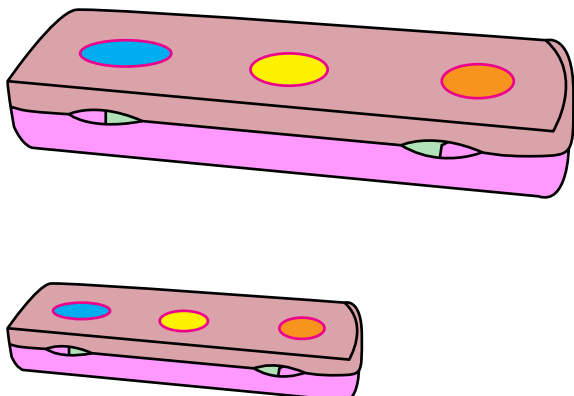
3. Which is longer?



4. Which is shorter?



5. Which is shorter?



6. Which is longer?



PREVIEW

Gain complete access to the largest collection of worksheets in all subjects!

Members, please log in to download this worksheet.

Not a member? Please sign up to gain complete access.

www.mathworksheets4kids.com