

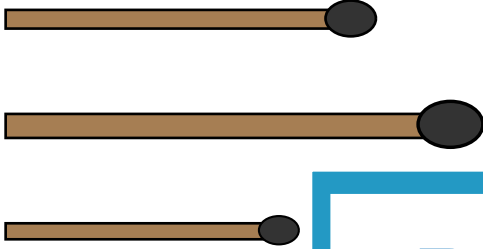
Name : _____

Long vs Short

Sheet 3

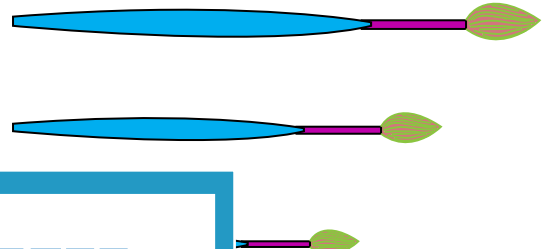
1

Tick the longest match.




2

Tick the shortest brush.




3

Tick the longest




4

shortest pushpin.



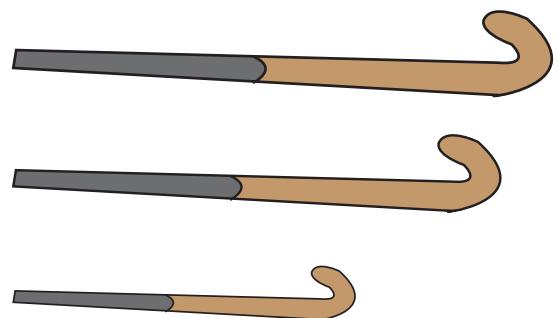
5

Tick the shortest



6

longest hockey stick.



PREVIEW

Gain complete access to the largest collection of worksheets in all subjects!

Members, please log in to download this worksheet.

Not a member? Please sign up to gain complete access.

www.mathworksheets4kids.com