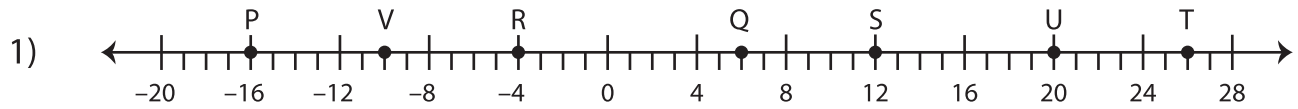


Find the Midpoint

Sheet 1

Use the number line to find the midpoints.



a) Midpoint of \overline{PQ} : -5

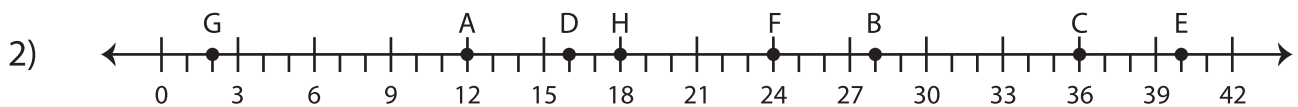
d) Midpoint of \overline{RU} : _____

b) Midpoint of \overline{QT} : _____

e) Midpoint of \overline{VR} : _____

c) Midpoint of \overline{RS} : _____

f) Midpoint of \overline{VQ} : _____



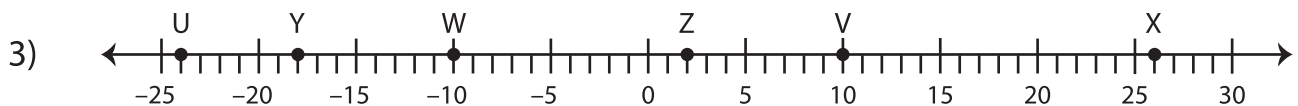
a) Midpoint of \overline{HB} : _____

d) Midpoint of \overline{DH} : _____

b) Midpoint of \overline{GA} : _____

e) Midpoint of \overline{FE} : _____

c) Midpoint of \overline{CE} : _____



a) Midpoint of \overline{VX} : _____

d) Midpoint of \overline{YZ} : _____

b) Midpoint of \overline{UW} : _____

c) Midpoint of \overline{ZV} : _____