


Name : \_\_\_\_\_

# More vs Less

Sheet 3

1. Tick the one that holds more liquid



2. Tick the one that holds less liquid




3. Tick the one that holds more liquid




4. Tick the one that holds less liquid



5. Tick the one that holds more liquid



6. Tick the one that holds more liquid



## PREVIEW

Gain complete access to the largest collection of worksheets in all subjects!


Members, please log in to download this worksheet.

Not a member? Please sign up to gain complete access.

[www.mathworksheets4kids.com](http://www.mathworksheets4kids.com)

# More vs Less

1. Tick the one that holds more liquid



2. Tick the one that holds less liquid



## PREVIEW

Gain complete access to the largest collection of worksheets in all subjects!

Members, please log in to download this worksheet.

Not a member? Please sign up to gain complete access.

[www.mathworksheets4kids.com](http://www.mathworksheets4kids.com)


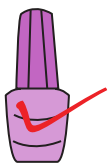
3. Tick the one that holds more liquid



4. Tick the one that holds less liquid



5. Tick the one that holds more liquid



6. Tick the one that holds more liquid

