


Name : _____

More vs Less

Sheet 3


1

Circle the one with more liquid.



2

Circle the one with less liquid.



3

PREVIEW

Gain complete access to the largest collection of worksheets in all subjects!

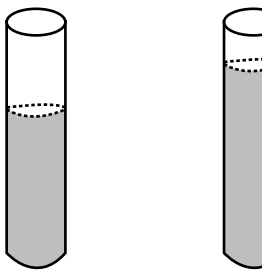
Members, please log in to download this worksheet.

Not a member? Please sign up to gain complete access.

www.mathworksheets4kids.com


4

Circle the one with less



5

Circle the one with more liquid.



Circle the one with less liquid.

