


Multiplication

Calculate the cost of objects.

1)



How much will 6 such toy helicopters cost?

2)



How much will 2 such toy drums cost?

3)



How much will 4 such vases cost?

PREVIEW

Gain complete access to the largest collection of worksheets in all subjects!

Members, please log in to download this worksheet.

Not a member? Please sign up to gain complete access.

www.mathworksheets4kids.com



How much will 8 such wallets cost?

5)




How much will 3 paddles cost?



How much will 6 such flower vases cost?

7)



How much will 5 such aquarium fish nets cost?

8)




How much will 11 such trophies cost?

Multiplication

Sheet 2

Calculate the cost of objects.

1)



How much will 6 such toy helicopters cost?

$$7 \times 6 = 42$$

2)



How much will 2 such toy drums cost?

$$12 \times 2 = 24$$

3)



How much will 4 such rockets cost?

$$4 \times 4 = 16$$

PREVIEW

Gain complete access to the largest collection of worksheets in all subjects!

Members, please log in to download this worksheet.

Not a member? Please sign up to gain complete access.

www.mathworksheets4kids.com



How much will 8 such wallets cost?

$$9 \times 8 = 72$$

5)



How much will 5 such paddles cost?

$$5 \times 5 = 25$$



How much will 6 such flower vases cost?

$$6 \times 6 = 36$$

7)



How much will 5 such aquarium fish nets cost?

$$8 \times 5 = 40$$

8)



How much will 11 such trophies cost?

$$3 \times 11 = 33$$