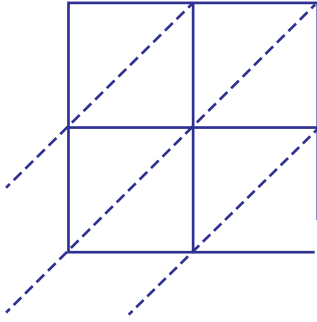


Lattice Multiplication

2-digit : S2

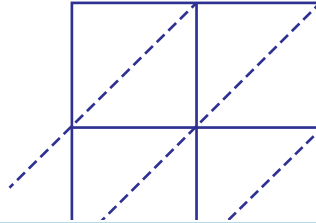
Use lattice multiplication method to find the product in each problem.

1) 73×50

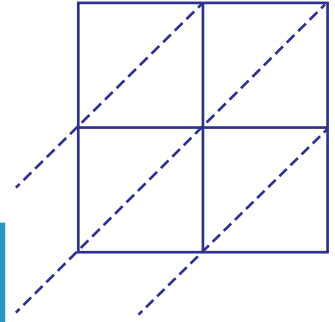


$73 \times 50 =$ _____

2) 54×81

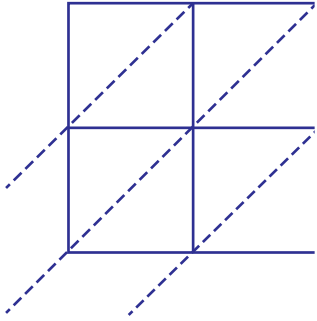


3) 87×46



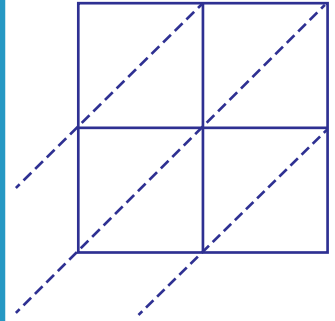
$87 \times 46 =$ _____

4) 12×34



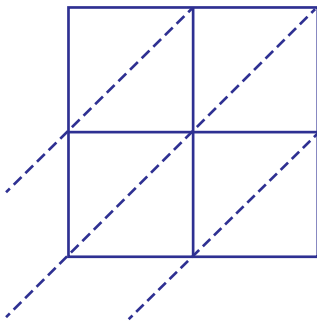
$12 \times 34 =$ _____

5) 39×78

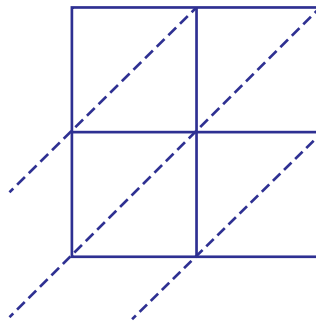


$39 \times 78 =$ _____

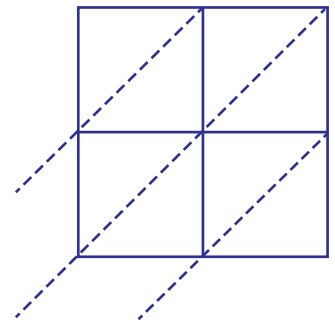
7) 68×29



$68 \times 29 =$ _____



$23 \times 90 =$ _____



$46 \times 15 =$ _____

PREVIEW

Gain complete access to the largest
collection of worksheets in all subjects!

Members, please
log in to
download this
worksheet.

Not a member?
Please sign up to
gain complete
access.

www.mathworksheets4kids.com