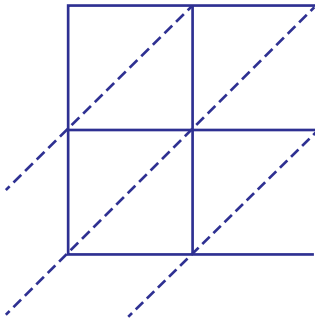


Lattice Multiplication

2-digit : S5

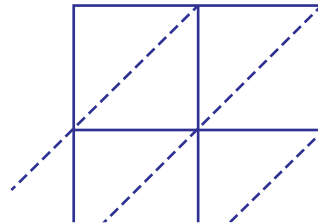
Use lattice multiplication method to find the product in each problem.

1) 93×25

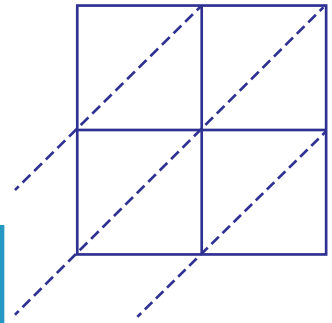


$93 \times 25 =$ _____

2) 46×69

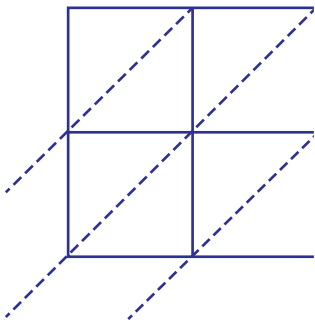


3) 17×58



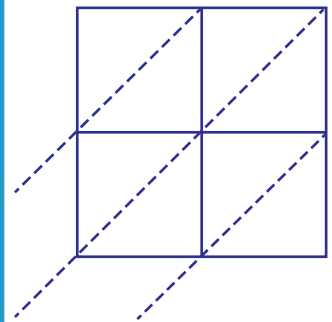
$17 \times 58 =$ _____

4) 34×71



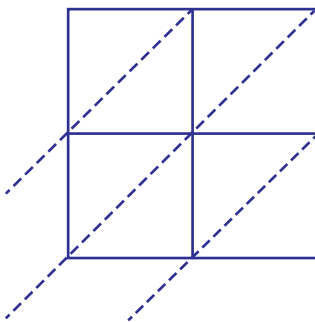
$34 \times 71 =$ _____

76×42

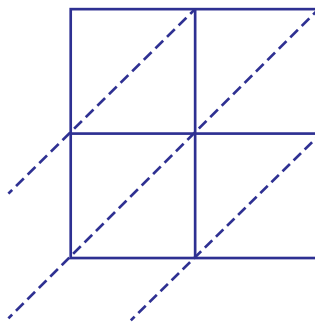


$76 \times 42 =$ _____

7) 89×30

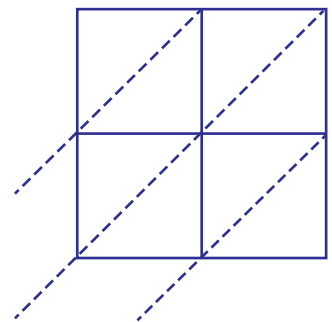


$89 \times 30 =$ _____



$62 \times 11 =$ _____

55×97



$55 \times 97 =$ _____

PREVIEW

Gain complete access to the largest
collection of worksheets in all subjects!

Members, please
log in to
download this
worksheet.

Not a member?
Please sign up to
gain complete
access.

www.mathworksheets4kids.com