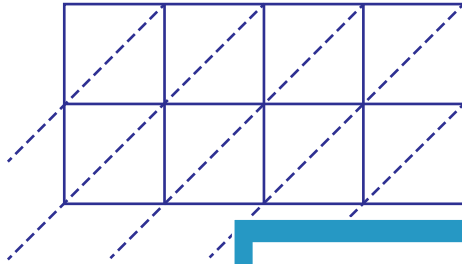


Lattice Multiplication

4-digit by 2-digit: S3

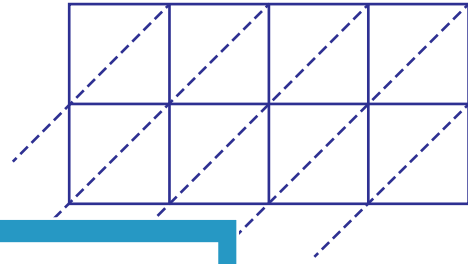
Use lattice multiplication method to find the product in each problem.

1) 5248×92



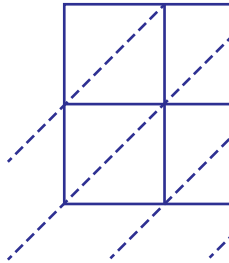
5248×92

2) 7126×14



= _____

3) 6352×39



6352×39

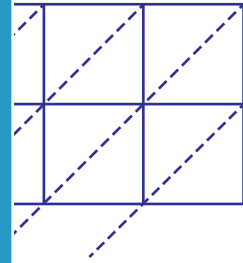
PREVIEW

Gain complete access to the largest
collection of worksheets in all subjects!

Members, please
log in to
download this
worksheet.

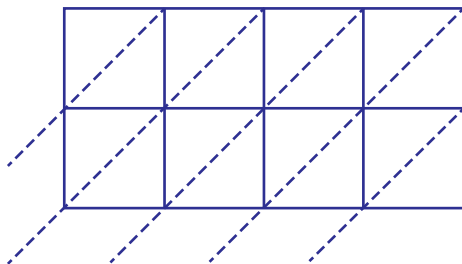
Not a member?
Please sign up to
gain complete
access.

www.mathworksheets4kids.com

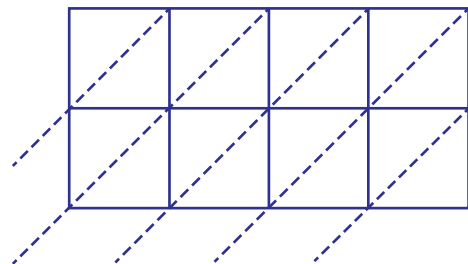


= _____

5) 9761×53



$9761 \times 53 =$ _____



$4570 \times 76 =$ _____